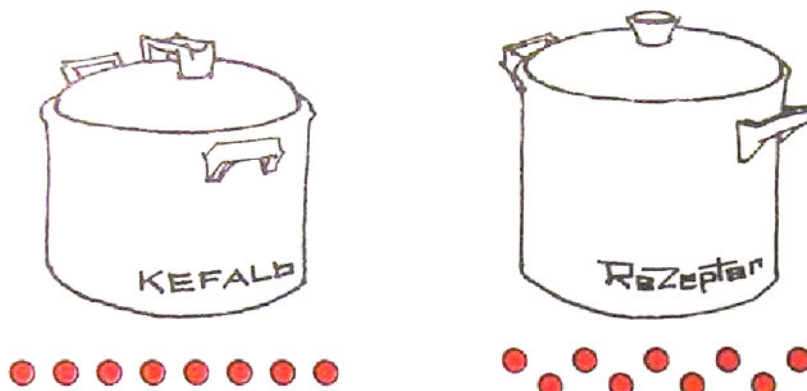


Homework 24


Problem 1

The red pot fits 8 glasses of water, and the green - 9. Which pot has the larger volume? Color the pots if the number of dots is equal to the number of glasses that fit in the pots.



Problem 2

Each bunny will drink one glass of milk. Will there be enough milk if each carton of milk contains 2 glasses?



Problem 3

Solve the problems using the number line.



$3 + 1 = \square$

$8 - 1 = \square$

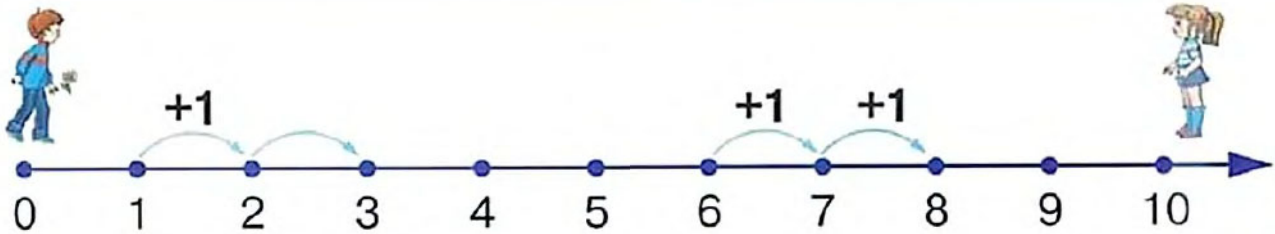
$8 + 1 = \square$

$4 + 1 = \square$

$10 - 1 = \square$

$2 - 1 = \square$

Problem 4



Remember: In order **to add 2** to any number, you need to take **two steps to the right** from that number on the number line, 1 step and then another step. When you add 1, say the next number in order.

$1 + 2 = 3$

$6 + 2 = 8$

$1 + \underbrace{1 + 1}_{=2} = 3$

$6 + \underbrace{1 + 1}_{=2} = 8$

Solve the problems using the number line.



$0 + \underbrace{1 + 1}_{=2} = \square$

$0 + 2 = \square$

$2 + \underbrace{1 + 1}_{=2} = \square$

$2 + 2 = \square$

$5 + \underbrace{1 + 1}_{=2} = \square$


$5 + 2 = \square$

$8 + \underbrace{1 + 1}_{=2} = \square$


$8 + 2 = \square$

Problem 5

Teddy Bear has 3 cars.

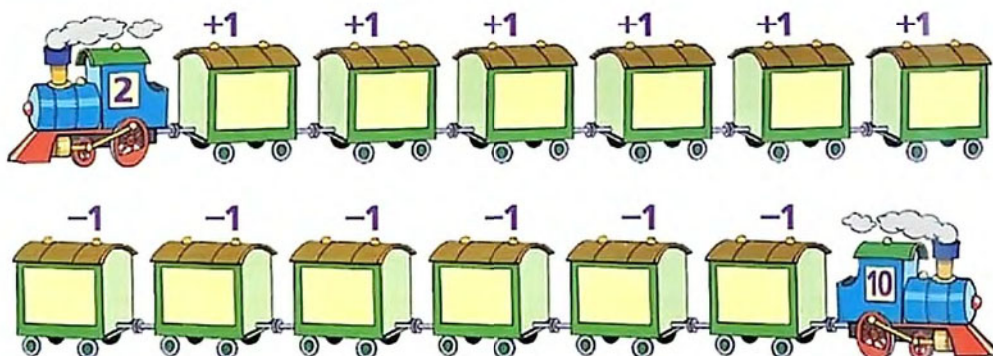


Help Teddy find different ways of how the cars can be put one after another. Color the cars in each row.



Problem 6

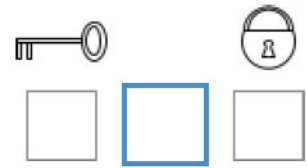
Solve the problems by adding and subtracting 1 to the numbers on the engines. Write your answers on the wagons.



Problem 7






Help Pinocchio find the right key to each lock and color the key in the same color as the lock it matches.

How many keys and locks are there in total?
What can you say about their amounts
(more or less)?





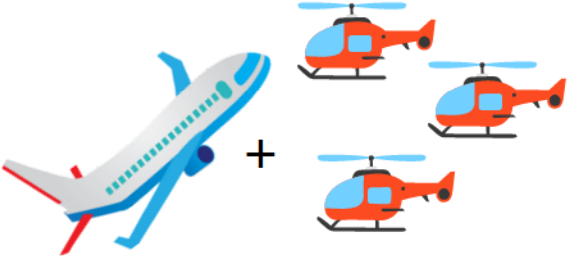
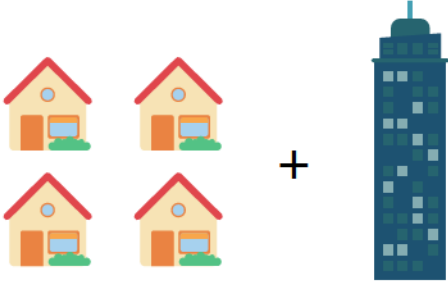
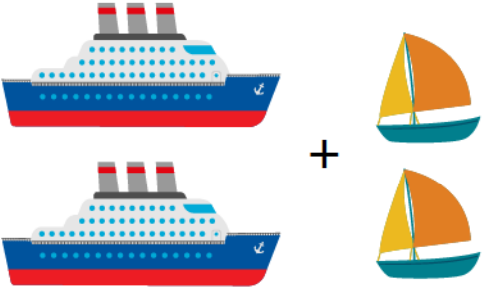
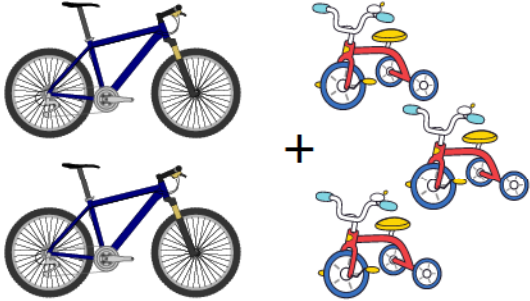
Problem 8

In the empty boxes, draw the objects to follow the pattern.

| | | |
|---|---|--|
|  |  |  |
| |  | |
| |  | |

Problem 9

Count the objects and solve the problems. Record your answers.
Hint: in order to solve all the problems you need to pick the correct units.

| | |
|---|--|
|  <p>$2 + 1 = \square$</p> |  <p>$3 + 2 = \square$</p> |
|  <p>$1 + 3 = \square$</p> |  <p>$4 + 1 = \square$</p> |
|  <p>$2 + 2 = \square$</p> |  <p>$2 + 3 = \square$</p> |