

Homework 16

$$\underline{N1} \quad \begin{cases} E_{\text{mech},1} = E_{\text{kin},1} + E_{\text{pot},1} \\ E_{\text{mech},2} = E_{\text{kin},2} + E_{\text{pot},2} \end{cases}$$

$$\Delta E_{\text{mech}} = E_{\text{mech},2} - E_{\text{mech},1} = \\ = \Delta E_{\text{kin}} + \Delta E_{\text{pot}} = 0$$

$$\Rightarrow \quad \Delta E_{\text{kin}} = -\Delta E_{\text{pot}}$$

N2.

$$\Delta E_{\text{pot}} = -2 \text{ J}$$



$$h = -\frac{\Delta E_{\text{pot}}}{mg} \approx 4 \text{ m}$$

N3. $E_{\text{pot}} = MgH$, $H = 100 \text{ m}$

$$V = 10 \text{ km}^3 = 10 (10^3 \text{ m})^3 = 10^{10} \text{ m}^3$$

N3. $M = 1600 \frac{\text{kg}}{\text{m}^3} \cdot 10^{10} \text{m}^3 = 10^{13} \text{kg}$

$$E_{\text{pot}} = 10^{13} \text{kg} \cdot 10 \frac{\text{m}}{\text{s}^2} \cdot 100 \text{m}$$

$$\approx 10^{16} \text{J}$$

Annual el. en. cons = 10^4 kWh/year

$$\approx 3.6 \cdot 10^{10} \text{ J/year}$$

$$N_y = \frac{10^{16} \text{J}}{3.6 \cdot 10^{10} \text{ J/year}} \approx 300,000 \text{ years}$$

N4*



$$E_{\text{pot}} = ?$$

$$E_{\text{pot}} = \sum_{i=1}^N m_i \cdot h_i \cdot g$$

Center of mass:

$$R_{\text{cm}} = \frac{\sum_{i=1}^N m_i h_i}{\sum_{i=1}^N m_i}$$

$$M = \sum_{i=1}^N m_i$$

$$E_{\text{pot}} = M \cdot R_{\text{cm}} \cdot g = Mg \frac{L}{2}$$

Classwork

Work and energy

Previously: $E_{\text{pot}} = mgh$

$$E_{\text{mech.}} = E_{\text{kin}} + E_{\text{pot.}} = \text{const.}$$

no forces other than gravity

Another conserved quantity: momentum

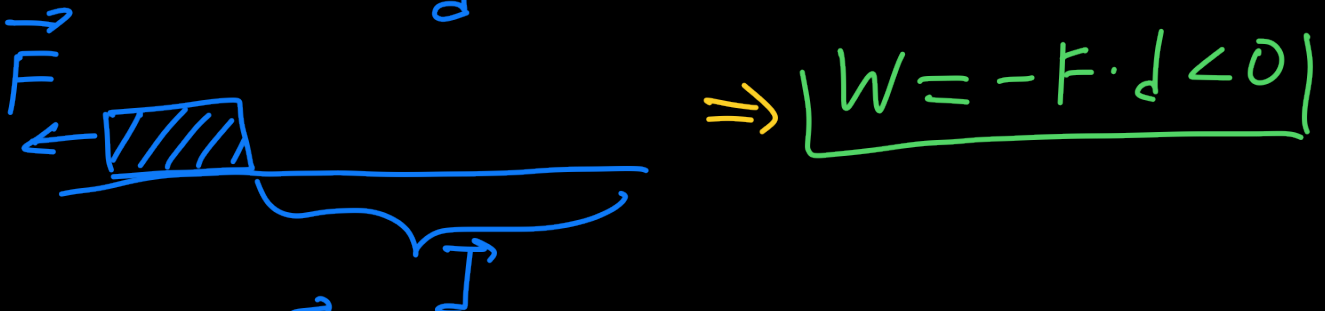
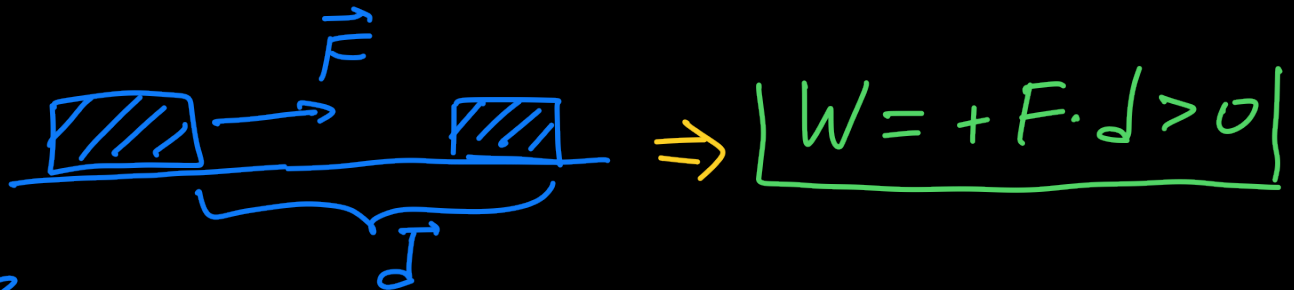
For the momentum to change:
one needs an external force!

$$\Delta \vec{p} = \vec{J} = \vec{F} \cdot t$$

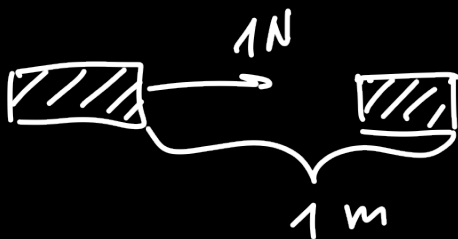
Similarly, the change in the kinetic energy is related to the force (or forces):

$$\Delta E_{\text{kin}} = W = F \cdot d$$

Work = distance \times force along the direction of motion.



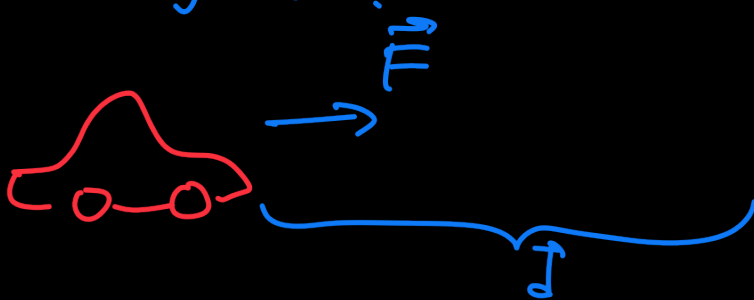
$$\begin{aligned}
 [W] &= 1 \text{ N} \cdot 1 \text{ m} = 1 \text{ Kg} \cdot \frac{\text{m}}{\text{s}^2} \cdot 1 \text{ m} = \\
 &= 1 \text{ Kg} \frac{\text{m}^2}{\text{s}^2} = 1 \text{ J} \\
 &= [E_{\text{kin}}] \text{ V}
 \end{aligned}$$



Ex 1.

A car is accelerating from rest up to 30 m/s . $| M = 2000 \text{ kg} |$.

What work was done by the engine?



$$\Delta E_{\text{kin}} = W = F \cdot d > 0$$

$$\Delta E_{\text{kin}} = \frac{m v^2}{2} - E_{\text{kin, before}}$$

$$= \frac{2000 \text{ kg} \cdot 900 \text{ m}^2/\text{s}^2}{2} = 900 \text{ kJ}$$


$$| W = \Delta E_{\text{kin}} = 900 \text{ kJ} |$$

Ex. 2. if $F = 3 \text{ kN}$,
what is d ?

$$W = +F \cdot d \Rightarrow d = \frac{W}{F}$$

$$d = \frac{900 \text{ kJ}}{3 \text{ kN}} = 300 \text{ m.}$$

Deceleration:



$$W = -F \cdot d < 0$$

$$\Rightarrow \Delta E_{\text{kin}} < 0.$$

What about the change in
the mechanical energy?

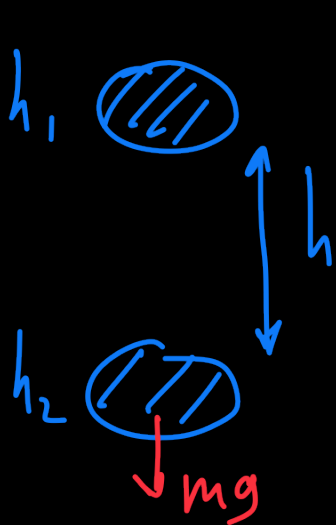
$$\boxed{\Delta E_{kin} = W_{all\ forces}} \quad (1)$$



A diagram showing a rectangular block with two horizontal arrows pointing outwards from its center. The arrow on the left is labeled F_2 and the arrow on the right is labeled F_1 .

$$\boxed{W_{all\ forces} = W_1 + W_2}$$

Work done by the gravity force



$$\boxed{h_1 - h_2 = h}$$

$$W_{grav} = mgh$$

$$\boxed{\Delta E_{kin} = mgh}$$

$$\boxed{\Delta E_{kin} = -\Delta E_{pot}}$$

$$\Delta E_{pot} = mgh_2 - mgh_1 = -mgh$$

$$\boxed{W_{grav} = -\Delta E_{pot}}$$

Work-energy Theorem

$$\begin{aligned}\Delta E_{\text{kin}} &= W_{\text{all forces}} \\ &= W_{\text{grav.}} + W_{\text{except grav.}}\end{aligned}$$

$$W_{\text{grav.}} = -\Delta E_{\text{pot}}$$

$$\Delta E_{\text{kin}} - W_{\text{grav.}} = W_{\text{except grav.}}$$

$$\Delta E_{\text{kin}} + \Delta E_{\text{pot}} = W_{\text{except grav.}}$$

$$\Delta E_{\text{mech.}} = W_{\text{except grav.}} \quad \textcircled{2}$$

① and ② are equivalent!