

Homework 12


Problem 1

On each string draw the same amount of beads as the number in the box.

A collection of colorful beads (purple, pink, blue, green, red, orange, yellow) is shown on the left. To the right are five wavy lines representing strings, each with a circled number: 3, 1, 5, 2, and 4.

Problem 2

Divide the apples between all of the kids.



Problem 3

Count and find out how many there are:

Big leaves

Small leaves

Big yellow leaves

Small yellow leaves

Oak leaves

Birch leaves

Big green leaves

Small green leaves



Problem 4

Look at the numbers in the boxes and color in the cubes in each row. Write how many green and yellow cubes you got.

Row 1: Six white cubes. Below them are two boxes: a green box followed by a minus sign and an empty white box, and a yellow box followed by a minus sign and a box containing the number 3.

Row 2: Six white cubes. Below them are two boxes: a green box followed by a minus sign and a box containing the number 2, and a yellow box followed by a minus sign and an empty white box.

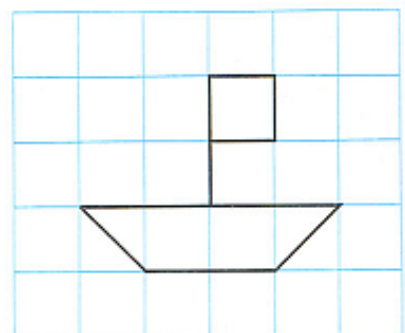
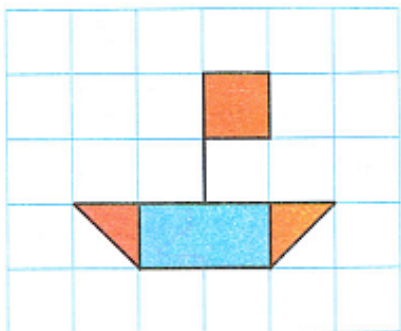
Row 3: Six white cubes. Below them are two boxes: a green box followed by a minus sign and an empty white box, and a yellow box followed by a minus sign and a box containing the number 2.

Row 4: Six white cubes. Below them are two boxes: a green box followed by a minus sign and an empty white box, and a yellow box followed by a minus sign and a box containing the number 1.

Row 5: Six white cubes. Below them are two boxes: a green box followed by a minus sign and an empty white box, and a yellow box followed by a minus sign and a box containing the number 5.


Problem 5

Help the Teddy Bear make the two pictures look the same:




Problem 6

Bunny has 6 balloons.




He gave 4 balloons to his friend Bear. Color in all of the possible different ways he can give the balloons (do not repeat the color pattern).




Problem 7

Circle the smallest pine tree.



Problem 8

Look at the picture. Try to make a math expression and solve it.

Clara has 3  

Julian has 2  MORE  

How many  does Julian have?

			=	
--	--	--	---	--

Problem 9

Color in yellow the stripes that are longer than the colored one and blue those that are shorter than the colored one.

