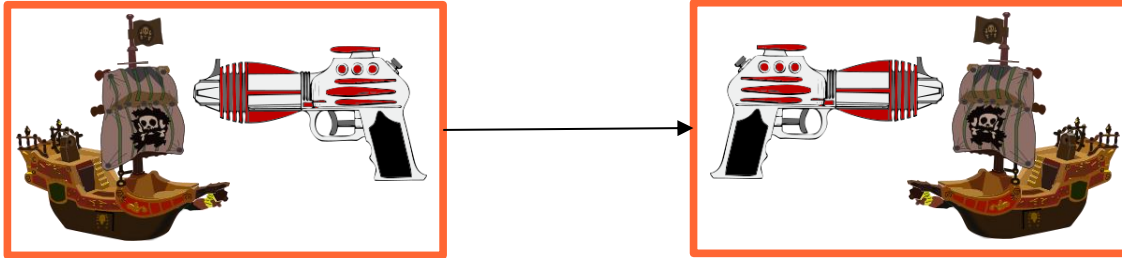


New Material I

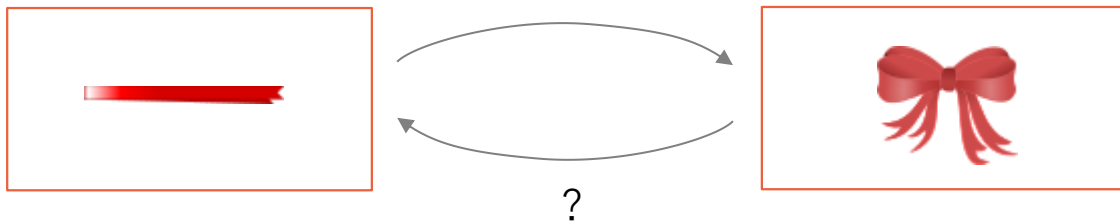
In mathematics, **inverse operations** are operations that 'undo' each other. Most operations we use have an inverse. Addition and subtraction are inverse operations – they “undo” each other.

5

a) Look at the pictures below and describe what Jack did with the toys? Can this operation be reversed?



b) Name the operations performed on the picture below. Can this operation be reversed?



6

To prepare a soup, a chef has cut some vegetables. Can these operations be reversed?



7

Write the inverse operations for each action:

To put on a shirt	
To break a toy car	
To climb up a tree	
To pour water into a cup	
To turn on a TV set	

8

Mind reading game.

1. Think of any number from 1 to 50. _____
2. Add 25 to it. _____
3. Subtract 20 from a product. _____
4. Subtract 6 from a product _____
5. Add 50 to a product _____
6. Subtract 14 from a product _____.

What did you end up with?

Tell me the result and I'll tell you the number you thought of.**REVIEW****How do we work with parentheses?****Removing parentheses.**

$$a + (b + c) = a + b + c$$

$$a + (b - c) = a + b - c$$

$$a - (b - c) = a - b + c$$

9

Number the order of operations in the expressions.

$$m + (n - k)$$

$$m + (n - k - t) + k$$

$$(m + n) - k$$

$$m + n - (k - t + k)$$

10

Open parentheses and calculate:

$$100 - (50 - 38) - (25 - 12) = \underline{\hspace{4cm}}$$

$$(49 + 11 - 16) - (29 - 26) = \underline{\hspace{4cm}}$$

$$(54 - 39) + (46 - 11) - (16 + 9) = \underline{\hspace{4cm}}$$

11

Calculate:

$$6\text{dm } 5\text{cm} - 4\text{dm } 9\text{cm} + 48\text{cm} = \underline{\hspace{4cm}}$$

$$77\text{cm} - 29\text{cm} + 1\text{dm } 9\text{cm} = \underline{\hspace{4cm}}$$

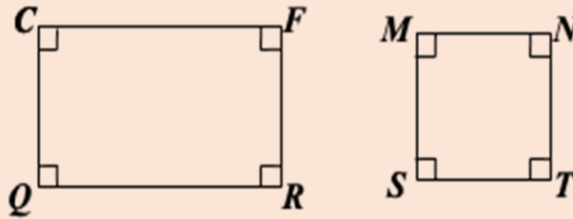
$$10\text{m} - 4\text{m } 7\text{dm} - 50\text{dm} = \underline{\hspace{4cm}}$$

New Material II

Special quadrilaterals:

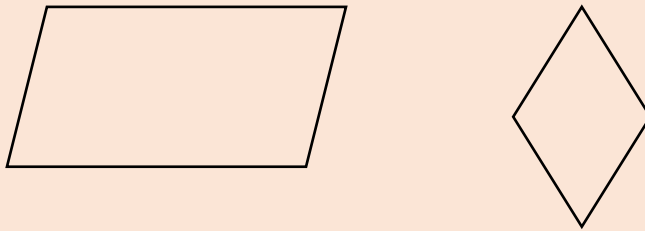
Rectangle: a quadrilateral in which all four angles are right angles.

Square: a quadrilateral in which all 4 angles are right angles, and all 4 sides are of equal length.




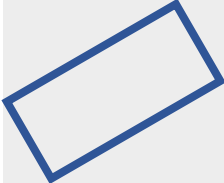


Parallelogram: A quadrilateral with 2 pairs of parallel sides.

Rhombus: A parallelogram with 4 sides of equal length.



12

Look at each figure. Place an X in the box if it appears to describe the figure pictured

				
4 vertices	<input type="checkbox"/>	<input type="checkbox"/>	<input type="checkbox"/>	<input type="checkbox"/>
Four sides	<input type="checkbox"/>	<input type="checkbox"/>	<input type="checkbox"/>	<input type="checkbox"/>
Opposite sides parallel	<input type="checkbox"/>	<input type="checkbox"/>	<input type="checkbox"/>	<input type="checkbox"/>
Perpendicular sides	<input type="checkbox"/>	<input type="checkbox"/>	<input type="checkbox"/>	<input type="checkbox"/>
Opposite sides have equal length	<input type="checkbox"/>	<input type="checkbox"/>	<input type="checkbox"/>	<input type="checkbox"/>
All sides have equal length	<input type="checkbox"/>	<input type="checkbox"/>	<input type="checkbox"/>	<input type="checkbox"/>

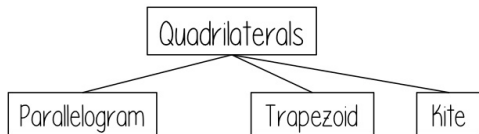
13 Answer the questions and explain your answers:

- a) Can square be a rectangle?
- b) Can square be a parallelogram?
- c) Can square be a rhombus?

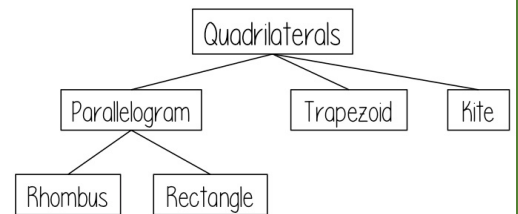
Did you know ...

Quadrilaterals were invented by the Ancient Greeks. It is said that Pythagoras was the first to draw one. In those days quadrilaterals had three sides and their properties were only dimly understood. It was the genius of the Romans to add a fourth side and they were the first to make a list of the different kinds of quadrilaterals, but it wasn't until 1813 that an English mathematician, J.P. Smith, discovered the trapezium. Quadrilaterals remain a rich source of investigations for researchers, the best-known unsolved problem being to find a general formula for the number of interior angles.

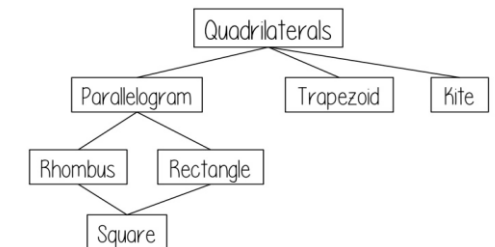
In the quadrilateral family, there were three kids: parallelogram, trapezoid, and kite. All the kids in this family have the same traits as the parents. Notice, that parallelograms, trapezoids, and kites all have four sides. Their interior angles all sum to 360° .



Parallelogram got married and had two kids: rhombus and rectangle. Since rhombus and rectangle are parallelogram's kids, they have all the same traits. Their opposite sides are parallel. They also have the same properties of their grandfather, quadrilateral.



All right y'all, this is where things kind of get sketchy. So, rhombus and rectangle... Well, they had a kid, named square. Trapezoid only had one child. He named his son, isosceles trapezoid, after him. Isosceles trapezoid has a few extra properties.



Kite didn't have any children.

Seven Types of Quadrilaterals

