

Lesson 1. Homework

- 1 The hedgehog lives in the green house, and the rabbit lives in the yellow house. Draw the path that the hedgehog can take when he goes to visit the rabbit, if the lake should always be to the right side of him.



- 2 Compute.

$3+2=$

$7-2=$

$4+5=$

$6-1=$

$8+2=$

$4-3=$

$1+5=$

$7-4=$

$6+3=$

- 3 Compute using a number line.

$5 + \square = 8$

$7 + 3 - \square = 9$

$\square - 6 = 3$

$9 - 5 + \square = 7$


$7 + \square = 9$

$10 - 6 + \square = 7$



4

What does not belong in each row? Cross out those objects.



5



Fill in the missing numbers.

0			3			6		8	9	
---	--	--	---	--	--	---	--	---	---	--

10		8		6			3			0
----	--	---	--	---	--	--	---	--	--	---

6

Continue the patterns below.



7 Solve word problems.

3 owls were sitting on the fence. 2 more owls joined them. How many owls are on the fence now?

You have 7 cookies and you ate 2 of them. How many cookies do you have left?

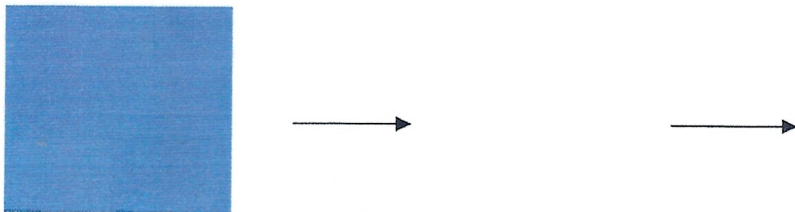
You have 7 balloons and your friend has 5 balloons. How many more balloons do you have than your friend?

8 Draw 2 new shapes in each row according to the rules below.


Change only the color:



Change only the size:



Change the shape and color:



Let's try to figure out who is who in this picture. (Connect the name with the person).

- Peter is the oldest. He wears glasses.
- Sophie is 8 years old. She has brown hair.
- The twins are the youngest. They are 6. Their names are Tom and Betty.

Did you find everybody? No! Who is the last member of the family? Right! This is the dog named Max. He is not a regular dog. He is very smart, can talk, play chess and helps the children with math.

