

1. Remove parentheses and simplify:

a). $(2x - 4) \div 4 + \left(\frac{1}{2}x + \frac{2}{3} \right) \cdot 3 =$ _____

b). $\left(\frac{3}{4} - x \right) \cdot 2 + \left(x + \frac{1}{6} \right) \cdot 3 =$ _____

2. Multiply:

$$1 \times 1 = \quad 1 \times (-1) = \quad (-1) \times 1 = \quad (-1) \times (-1) =$$

$$3 \times 5 = \quad 3 \times (-5) = \quad (-3) \times 5 = \quad (-3) \times (-5) =$$

3. Solve the equations:

$$\frac{2}{5}x = \frac{1}{15}$$

$$\frac{1}{3}x + \frac{1}{3} = \frac{1}{2}$$

$$\frac{5}{16} - \frac{y}{5} = \frac{1}{4}$$

5. Cross out the equations that are impossible to solve, and solve the rest:

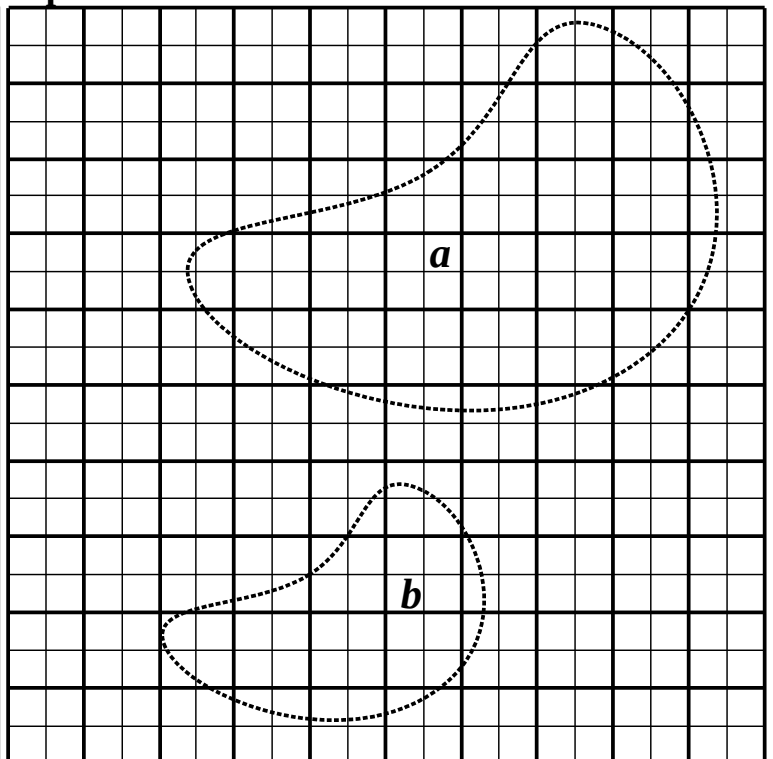
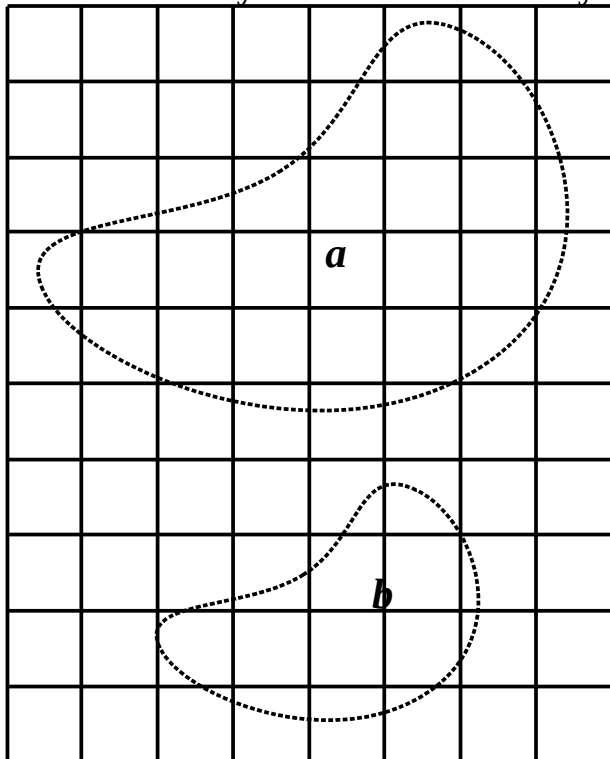
$$|y + 2| = 4$$

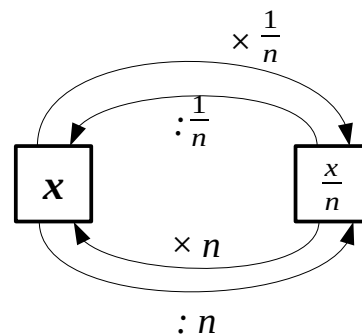
$$|y + 2| = -4$$

$$|x - 3| = -1$$

$$|x - 3| = 1$$

6. What exactly is the area of a curvy shape?





7. Calculate:

$$2 \times \frac{1}{4} =$$

$$\frac{1}{10} \times \frac{1}{2} =$$

$$\frac{1}{5} \times \frac{1}{6} =$$

$$2 : \frac{1}{4} =$$

$$\frac{1}{10} : \frac{1}{2} =$$

$$\frac{1}{5} : \frac{1}{6} =$$

$$2 \times \frac{1}{5} =$$

$$\frac{1}{10} : \frac{1}{6} =$$

$$\frac{1}{12} : \frac{1}{4} =$$

$$2 : \frac{1}{5} =$$

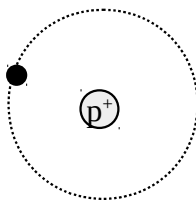
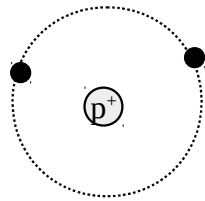
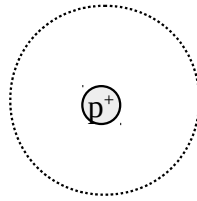
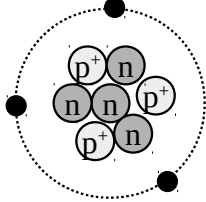
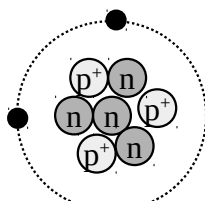
$$\frac{1}{10} \times \frac{1}{6} =$$

$$\frac{1}{12} \times \frac{1}{4} =$$

8. Negative numbers in atoms:

Atoms contain positive protons and negative electrons. A proton has an electric charge **+1**. An electron has an electric charge **-1**. Atoms do not have net electric charges since the numbers of electrons and protons are equal. Electrons can be added to atoms or removed from atoms. This way atoms acquire a charge becoming ions.

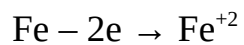
A. Complete the table:

Symbol	Protons	Neutrons	Electrons	Diagram	Electric charge
H					
					
					
Li					
					

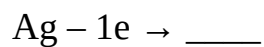
B. Complete the table:

Symbol	Protons	Electrons	Electric charge
O	8	8	
O ²⁻	8		-2
Na	11		0
Na ⁺	11	10	
N		7	0
N ³⁻	7		-3
Mg	12		0
Mg ²⁺	12		+2

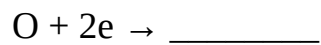
C. Calculate resulting electric charges




$$0 - (-1) \times 2 = 2$$




$$\underline{\hspace{2cm}}$$



$$\underline{\hspace{2cm}}$$



$$\underline{\hspace{2cm}}$$



$$\underline{\hspace{2cm}}$$