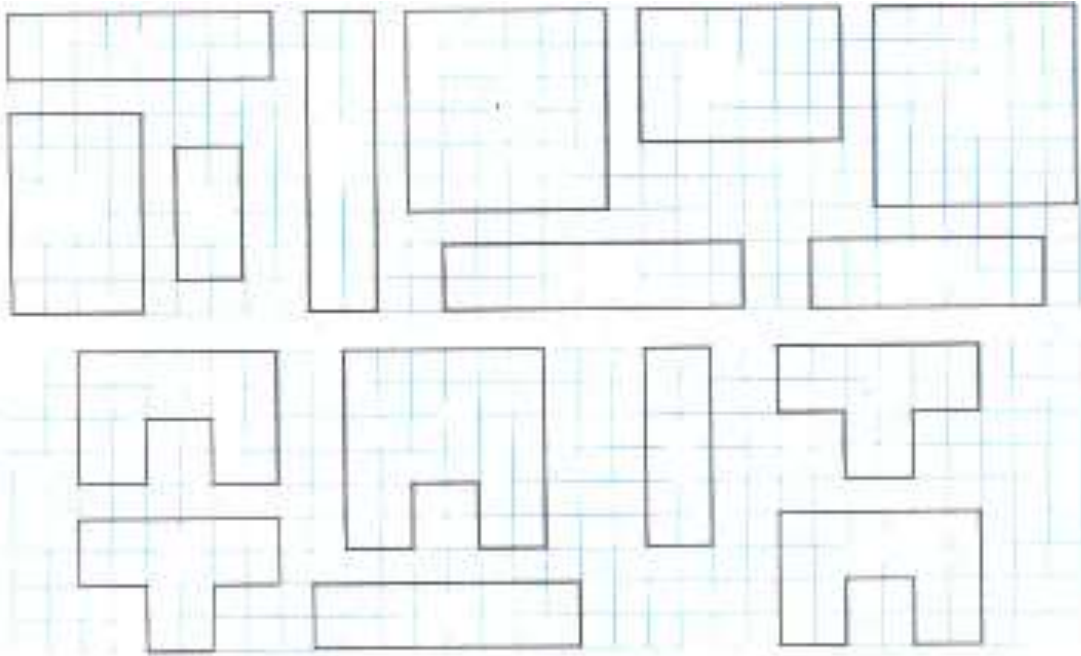


Math 0.

Homework 26.

Problem 1. Find the matching shapes and color them in the same color. Each shape should have their own color.



Problem 2. Solve.

$$3 + 1 + 5 = \square$$

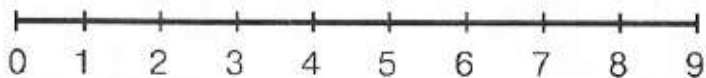
$$9 - 7 + 4 = \square$$

$$9 - 8 + 3 + 2 = \square$$

$$8 - 2 + 1 = \square$$

$$6 + 3 - 1 = \square$$

$$5 + 2 - 6 + 7 = \square$$



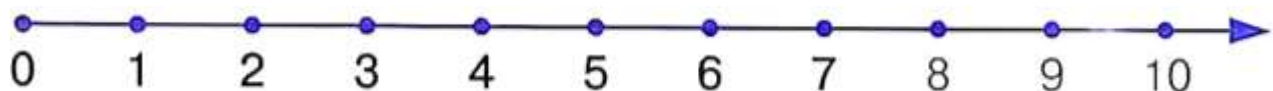
Problem 3. Challenge. Place “+” or “-” signs instead of “*” symbol.

$$9 * 3 * 2 * 0 = 8$$

$$4 * 3 * 2 * 9 = 0$$

$$2 * 1 * 7 * 3 = 5$$

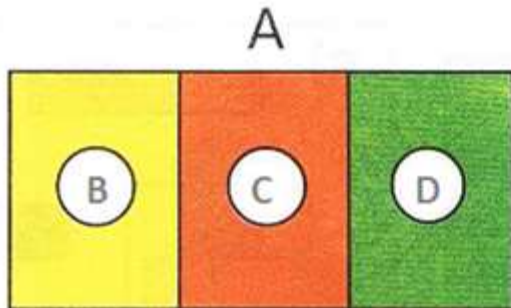
$$7 * 2 * 6 * 1 = 2$$



Problem 4. Add more apples and pears to each tree to make a total of 12 apples and 11 pears. How many more apples did you add? How many more pears did you add?



Problem 5. Fill out missing letters to the empty boxes. Make true sentences.



$$A = \boxed{} + \boxed{} + \boxed{}$$

$$\boxed{} - B = \boxed{} + \boxed{}$$

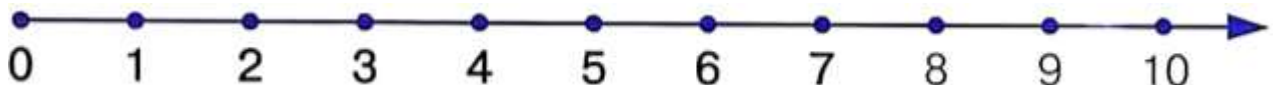
$$\boxed{} - C - D = \boxed{}$$

$$B + C = \boxed{} - \boxed{}$$

Problem 6. Solve.

$$9 + 1 = \boxed{} \quad 7 + 3 = \boxed{} \quad 10 - 0 = \boxed{} \quad 5 + 5 = \boxed{}$$

$$10 - 3 = \boxed{} \quad 6 + 4 = \boxed{} \quad 10 + 0 = \boxed{} \quad 10 - 5 = \boxed{}$$

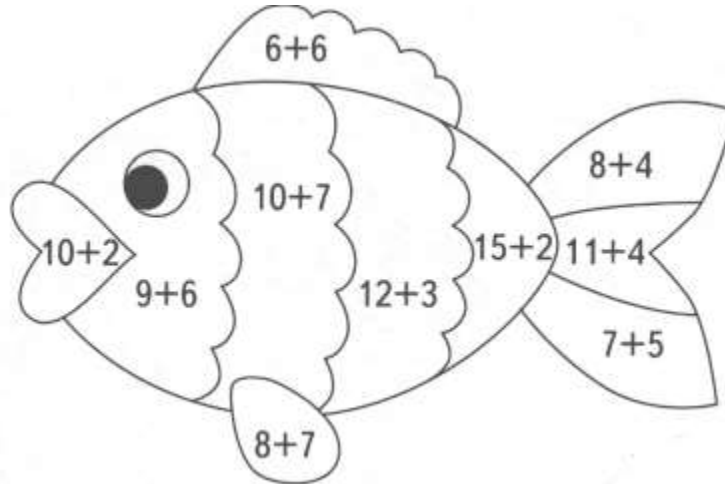


Problem 7. Color fish according to the instructions below:

$12 = \text{RED}$

$15 = \text{YELLOW}$

$17 = \text{GREEN}$



Problem 8. Fill out the blank.

	10	11	12	13	14	15	16	17	18	19
+1	7									


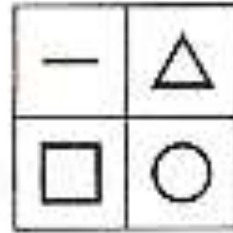
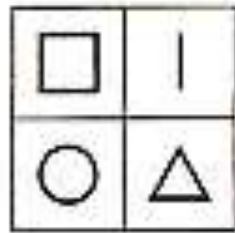
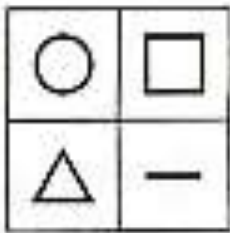
	10	11	12	13	14	15	16	17	18
+2									



Problem 9. Help a student walk to school. Draw 2 different ways (draw a line through the dots): the shortest path and a longest. Use two different colors please.



Problem 10. Discover the pattern in the first three squares and fill in the 4th one.



Problem 11. Color according to the instructions or cut and glue to make a picture.

