

HW 3

Place value, number line.

8

Is it TRUE? Move one number to make the following equations TRUE:

Example: $1 + 2 + 3 = 4$ - False; $2 + 3 = 4 + 1$ - True

$11 + 12 + 13 = 14$ _____

$3 + 9 + 6 = 2 + 4$ _____

$21 + 22 + 24 = 23$ _____

$3 + 7 + 11 = 5 + 10$ _____

$11 + 21 + 16 = 2 + 3$ _____

9

Using a ruler, divide a given rectangle into 4 equal pieces in 4 different ways.



10

Write the expressions instead of words sentences:

a) the sum of 29 and 2 is greater than A _____

b) B is greater than the difference between 20 and 5 _____

c) C is equal to the sum of 11, 32 and 40 _____

d) the difference between 100 and D is less than E _____

11

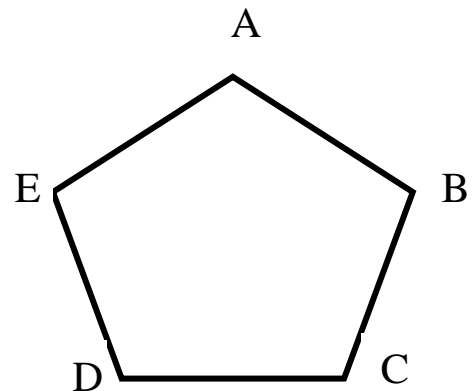
I have ten boxes, with a total weight of 75kg: 15 kg, 13 kg, 11 kg, 10 kg, 9 kg, 8 kg, 4 kg, 2 kg, 2 kg, 1 kg.

I want to pack the boxes into 3 crates, but each crate can carry a maximum of 25 kg.

How can I pack the boxes into the crates? (There may, or may not, be more than one way!)

12


Using a ruler, connect point A with points D and C.
Also Connect points E and B.
How many triangles can you find on the picture?




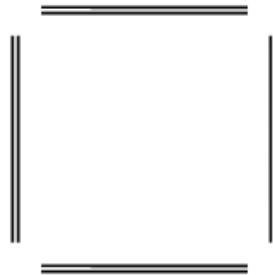
13

Matchsticks puzzles: Using 8 matchsticks, you can make one square or two squares.

one square:



two squares:



Look at the picture below. Make the same shape on your table (instead of matchsticks you can use toothpicks or any other short sticks of the same length)?

Remove 2 matchsticks (do not touch the other matches) to get 3 squares. How many matchsticks should you remove to get 2 squares?

Draw your solutions here.

