

Classwork 3

WARM-UP

1

Write down as a number expression and calculate.

Six more than 17 _____

Five less than 25 _____

Seven increased by 5 _____

The sum of eight and 6 _____

45 more than 5 _____

The sum of 16 and 8 _____

2

Skip-count by 2s from 14 to 26: _____

Skip- count by 3s from 15 to 30: _____

Skip - count by 4s from 4 to 24: _____

3

Make two expressions equal:

a) $17 + 12 = 20 + \underline{\hspace{1cm}}$

b) $37 + 19 = 40 + \underline{\hspace{1cm}}$

c) $79 + 14 = 80 + \underline{\hspace{1cm}}$

New Material

Natural numbers or Counting Numbers. How many...?

1, 2, 3, 4, 5, etc. are **NATURAL or Counting numbers** (we use them to count objects).
Any natural number is either one or a collection of as many ones as a number represents.

Example - number 27 is a collection of 27 ones.

A **number** is a count or measurement that is just an **idea** in our minds. We write or talk about numbers using **numerals** such as "3" or "three." But we could also hold up three fingers or tap the table 3 times. A numeral is a **symbol or name** that stands for a number. *Examples:* 3, 49, eleven.

Lesson 3

Natural numbers, position value. Tally marks.

A digit is a **single symbol** used to make numerals. **0, 1, 2, 3, 4, 5, 6, 7, 8, and 9** are the ten digits we use in everyday numerals. *Example:* The numeral 51 is made up of 2 digits ("5", and "1").

The number system used today is called the **base-ten, or decimal system**. It has 10 digits (0–9) that can be combined to write any number. The base-ten system was invented by Hindus in ancient India. Later, Arabs improved the system. For this reason, the digits 0–9 are called **Hindu-Arabic numerals**.

4

Counting out loud:

- Go over all names from 1 to 10,
- skip-count by 10s to 100,
- skip-count by hundreds to 1,000.

5

What number has:

- 5 hundreds, 2 tens and 7 ones? _____
- 7 hundreds, 0 tens and 0 ones? _____
- 3 hundreds, 2 tens and 9 ones _____

6

Compare numbers, using $<$, $>$, $=$ (less than, greater than, equal to)

$$\begin{array}{l} 500 \text{ } \underline{\hspace{1cm}} \text{ } 50 \\ 15 \text{ } \underline{\hspace{1cm}} \text{ } 155 \end{array}$$

$$\begin{array}{l} 322 \text{ } \underline{\hspace{1cm}} \text{ } 232 \\ 134 \text{ } \underline{\hspace{1cm}} \text{ } 314 \end{array}$$

$$\begin{array}{l} 606 \text{ } \underline{\hspace{1cm}} \text{ } 660 \\ 201 \text{ } \underline{\hspace{1cm}} \text{ } 210 \end{array}$$

7

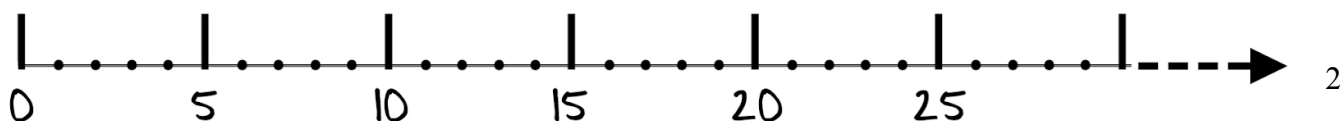
Think and discuss:

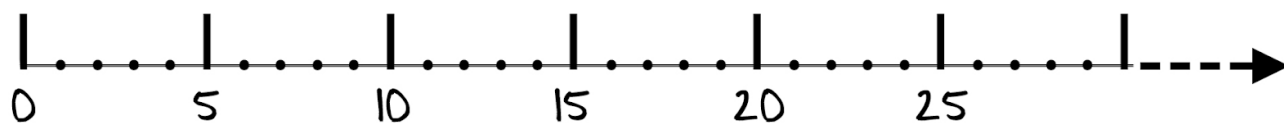
- Does the biggest number exist? What could it be?
- What is the difference between any number and the next number?
- What is the difference between any number and the previous number?
- What operation should you do to get from a number to a bigger number?
- What operation should you do to get from a number to a smaller number?

Number Line

Moving along the number line: The number line goes from left to right - the smallest number is zero, number 2 will be after 1, etc.

The fact that number 5 is after 4, meaning it's bigger than 4, and before 6, meaning it's smaller than 6.





8.

On the number line above find and write the numbers: 4, 9, 13, 17, 21, 27 and 30.

9.

Compare and order the numbers: 31 235 809 80 99 23

_____ < _____ < _____ < _____ < _____ < _____

Questions: While moving along the number line, which direction should you choose to get

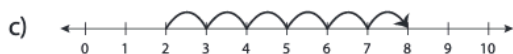


a) to the bigger number?

b) to the smaller number?

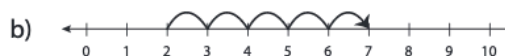
10

a) Which number line correctly shows the addition sentences?

1) $5 + 3 = 8$

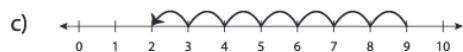
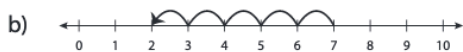
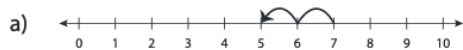


2) $7 + 2 = 9$



b) Which number line correctly shows the subtraction sentences?

1) $7 - 5 = 2$



2) $9 - 8 = 1$



NUMBERS

The sequence of natural numbers is **infinite** - the biggest number doesn't exist. To any number you take, you can always add another 1 and get even bigger number.

This year and many years after that we will talk a lot about numbers.
There are several areas of mathematics which study NUMBERS.

One of them is **Number Theory** and it studies numbers and the properties of operations between them.

Ancient ways of recording:

- Tally marks. Dot and lines tallying, stroke tallying (picture of Ishango bone)
- Human body is the 1st calculator (fingers, toes, arms and face)
- Mesopotamian's symbols. 2,500 years ago, in ancient Mesopotamia,

ones were written as Δ , tens as \blacktriangleleft , and 60 as \blacktriangledown .

11 Choose a correct answer. How would they write number 124 in Mesopotamia those days?

- a) $\blacktriangleleft\blacktriangledown\blacktriangledown\Delta\Delta\Delta\Delta$
- b) $\blacktriangledown\blacktriangledown\blacktriangleleft\blacktriangleleft\Delta\Delta\Delta\Delta$
- c) $\blacktriangledown\blacktriangleleft\blacktriangleleft\Delta\Delta\Delta\Delta$
- d) $\blacktriangledown\Delta\Delta\Delta\blacktriangleleft\blacktriangleleft\blacktriangledown$
- e) $\blacktriangledown\blacktriangledown\Delta\Delta\Delta\Delta$

12 Try writing your own birthday in Mesopotamian's symbols

Did you Know ...?

It may be hard to imagine today that long ago people used to count using scratches (**tally marks**) on sticks or counted with the help of small stones or just with fingers. The word tally comes from Latin *talea* – twig or cutting. The word “calculate” comes from the Latin *calculus*, which means *small stone*. In the following we look at these ancient counting devices.

Tally sticks, made of wood or bone, have been used since ancient times as a “data recording” device or memory aid to record numbers, quantities, or even messages.

The most famous of such artefacts is possibly the **Ishango bone** has been dated to the **Upper Paleolithic Period** around 22000 years ago. It is on permanent exhibition at the **Royal Belgian Institute of Natural Sciences**, Brussels, Belgium

The Ishango bone, dated from 22,000 years, can be considered as the oldest mathematical tool of humankind because the arrangement of the notches on three columns suggests an arithmetical intention.



Tally marks are typically clustered in groups of five and we all use it.

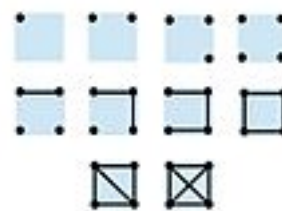
1. Mostly used in Europe, Australia, New Zealand and North America



2. Mostly used in France, Spain and Brazil



3. This method is used for counting by 10.



Can you write 23, using each of these systems?

1. _____

2. _____

3. _____