



Show with lines which decoration goes to which box.

Ornaments with math problems:

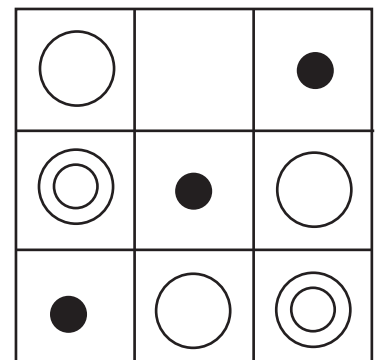


- Blue ornament:  $7+1$
- White ornament:  $4+4$
- Blue ornament with green bow:  $2+3$
- Red ornament with yellow star:  $9-2$
- White ornament:  $1+4$
- White ornament:  $10-5$
- White ornament:  $4+3$
- White ornament:  $1+6$
- White ornament:  $2+6$
- White ornament:  $5+2$
- White ornament:  $6-1$
- White ornament:  $3+5$

Boxes with numbers:

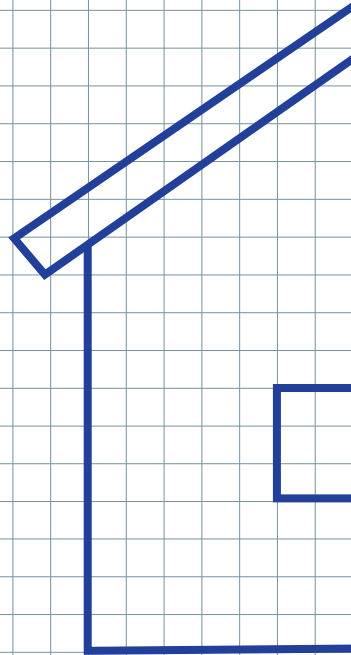

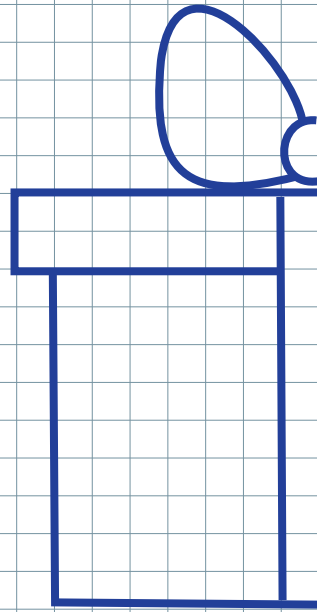
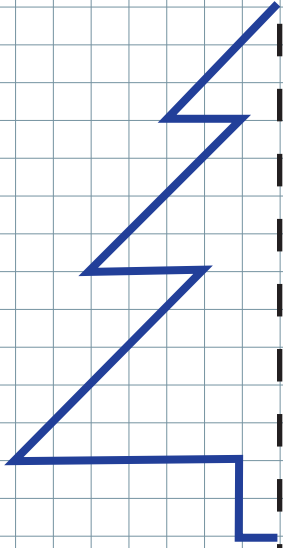
- Box 1 (left):  $8$
- Box 2 (middle):  $5$
- Box 3 (right):  $7$

A girl with pigtails, wearing an orange dress and green shoes, stands next to the boxes.

- Thanks for helping us, - said Billy and Greta. - Now it's time to close boxes. Let's finish the patterns to seal the lid!



Draw the second half



Cut this page by dotted lines, then use mirror to check if you did the previous exercise correctly.

