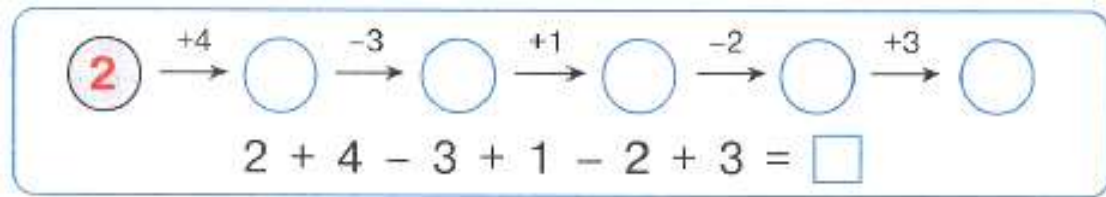


**Problem 1.** Continue the chain.



Find mistakes and correct them.

$$3 + 2 = 5$$

$$4 - 3 = 1$$

$$3 < 5$$

$$6 - 4 = 2$$

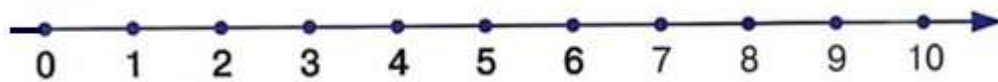
$$3 + 3 = 6$$

$$4 > 6$$

$$5 + 1 = 4$$

$$6 - 1 = 5$$

$$6 > 1$$



Place “+” or “-”.

$$5 * 3 * 1 = 1$$

$$1 * 5 * 4 = 2$$


$$6 * 3 * 1 = 4$$

$$4 * 1 * 2 = 3$$

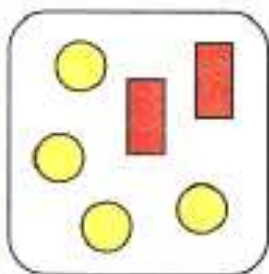
$$4 * 1 * 2 = 5$$

$$2 * 3 * 1 = 6$$

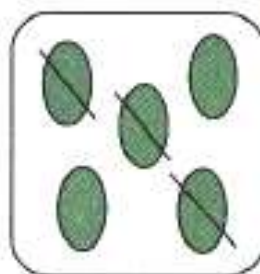
Create a number sentences according to the pictures and solve.



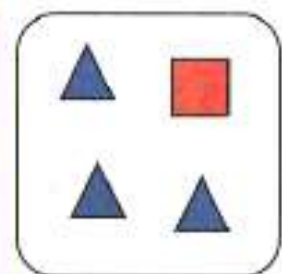
$$6 - 2 = \square$$



$$4 + 2 = \square$$



$$\square - \square = \square$$



$$\square + \square = \square$$

Fill in the blank boxes.


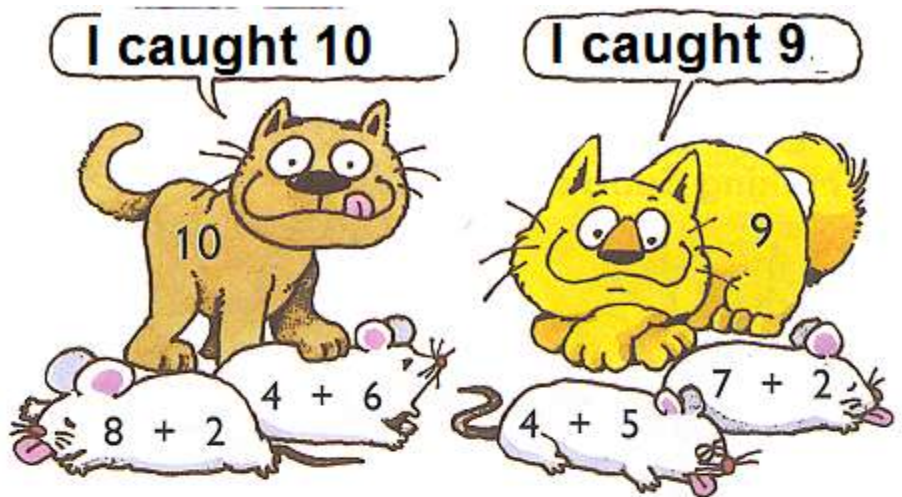
$$3 + \square = 8$$

$$\square - 2 = 6$$
































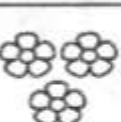




$$8 - \square = 1$$

**Problem 2.** Color each column using 3 colors: red, yellow and blue. Make sure no column looks the same.


**Problem 3.** Find out what mice each cat caught. Color the mice with the same color as the catcher cat.



**Problem 4.** Find and color the flowers according to the addresses listed at the bottom of the page.

	A	B	C	D	E	F
1						
2						
3						
4						
5						
6						

C	3	A	6	E	2
F	2	C	1	A	4
D	5	B	4	F	3

**Problem 5.** Funny questions game.

- Who has the longest neck if the ostrich's neck is shorter than a rhinoceros' and longer than a giraffe's?
- A corridor is colder than a kitchen. The living room is warmer than a kitchen. What room is the coldest?



