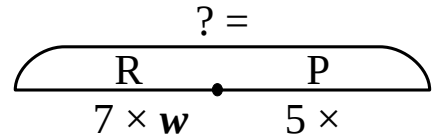


Homework for Lesson № 5

1

Complete the drawings and write expressions to solve the word problems

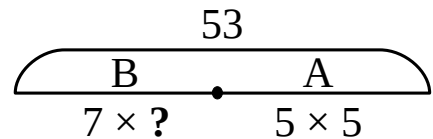
Roses come in bunches of 7, peonies come in bunches of 5. How many flowers are in w bunches of roses and q bunches of peonies?



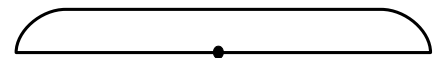
Mike runs 2 miles every week day and 5 miles every weekend day. How many miles does Mike run in a week?



Bananas come in 7 kg boxes and apples come in 5 kg bags. Altogether these fruits weigh 53 kg. How many boxes are there if there are 5 bags of apples?



Mike has been making 3 origami frogs a day for 6 days. Lisa has been making 4 origami cranes a day for x days. How many origami animals did they make together?



2

Complete:

$1 \text{ kg} \times 4 = \underline{\hspace{2cm}}$

$1 \text{ m} \times 7 = \underline{\hspace{2cm}}$

$1 \text{ egg} \times 4 = \underline{\hspace{2cm}}$

$q \times 3 = \underline{\hspace{2cm}}$

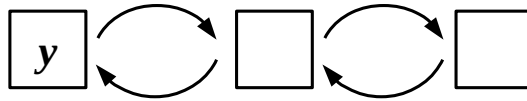
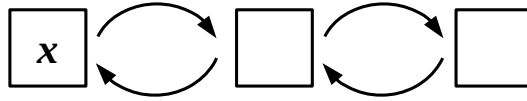
$1 \text{ sec} \times 6 = \underline{\hspace{2cm}}$

$x \times 3 = \underline{\hspace{2cm}}$

3

Analyze and solve the equations

$x \times 7 - 22 = 41$
$x \times 7 = 41 +$
$x \times 7 =$
$x =$
$x =$



$y : 4 + 21 = 27$

4

Solve the equations elsewhere and copy your answer here:

$9 \cdot y - 21 = 15$

$y \times 5 - 18 = 22$

$(x + 2) - 22 = 58$

$y = \underline{\hspace{2cm}}$

$y = \underline{\hspace{2cm}}$

$x = \underline{\hspace{2cm}}$

5

Bananas are packed in m kg per box.
Apples are packed in w kg per bag. There are 4
boxes of bananas and 9 bags of apples.



Explain the meanings of the expressions that
produce meaningful results and identify the
ones that do not.

$m \times 4$	
$w \times 9$	
$4 + 9$	
$m \times w$	
$m - w$	

6

Move the points according to the rule:

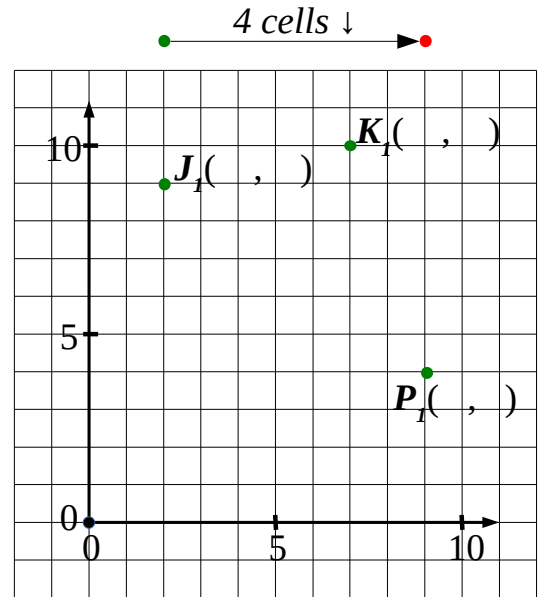
$$J_1(\quad , \quad) \rightarrow J_2(\quad , \quad)$$

$$K_1(\quad , \quad) \rightarrow \underline{\hspace{2cm}}$$

$$P_1(\quad , \quad) \rightarrow \underline{\hspace{2cm}}$$

Try to find coordinates of S_2 without plotting:

$$S_1(1, 5) \rightarrow S_2(\quad , \quad)$$



7

Complete the graphs according to the description.

Each of five cats is a friend of all others	Cats that eat ...	
	... lunch together	... dinner together

Connect all cats that ...

... don't eat dinner together	... don't eat neither lunch nor dinner together (don't eat together at all)	... don't eat lunch together

8

Which expression does each program evaluate?

①: $36 : x$

①: $21 + 509$

①: $y - 12$

②: $22 + \textcircled{1}$

②: $q \times \textcircled{1}$

②: $w : \textcircled{1}$

9

Construct rhombus $ABCD$ with sides 5 cm. Describe your algorithm.

1. Plot _____

2. _____

3. _____

4. _____

•
 A

•
 C

10

Try to construct rhombus $KLMT$ with sides 3 cm. Describe your algorithm.

1. Plot _____

2. _____

3. _____

4. _____

•
 K

•
 M

Which step of the algorithm failed? _____

Why? _____

11

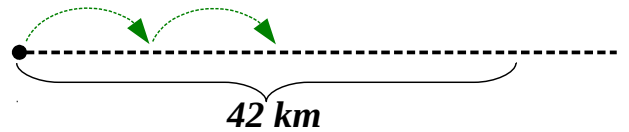
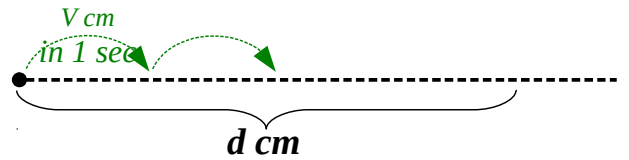
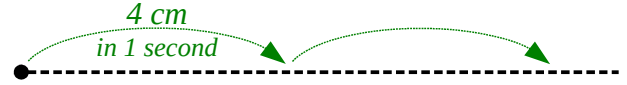
Solve the word problems:

A. An ant moves 4 cm every second. How far does it move in 6 seconds?

B. An ant moves 4 cm every second. How far does it move in t seconds?

C. An ant moves v cm every second. How long does it take to move d cm?


D. A river flows 6 km in an hour. How long will it take a raft to drift 42 km downstream?



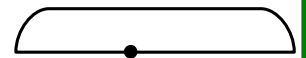
12

For each equation choose the correct auxiliary drawing. Use it to solve the equations and then check your answer.

$32 - x = 8$



$32 : x = 8$



$y \times 5 = 25$



$y + 5 = 25$



13

There is a bug on the outside of each of the 3D shape on its invisible face. Color that face in yellow.

The bug crawls across all the vertical faces of the shape and returns to its original position. Trace the visible part of its path with a solid lines and the invisible part with a dashed one.

