

Homework for Lesson № 1

1 In your notebook make auxiliary drawings and solve the equations:

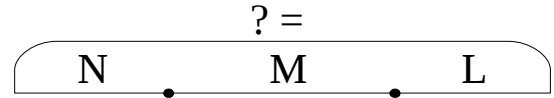
$$x - 124 = 76$$

$$y + 28 = 132$$


$$500 - z = 134$$

2 Use the drawings to solve the word problems

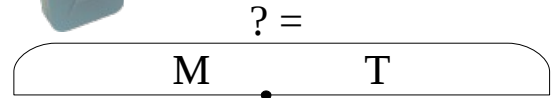
A. Nick has 12 pencils, Mike has 7 pencils, Lisa has 8 pencils. How many pencils do the three kids have altogether?



B. There are 12 fish in an aquarium. The second aquarium has 5 more fish than the first. How many fish are in the third aquarium if there are 50 fish in all three?



C. A taxi driver used 12 gallons of gasoline on Monday. This is 4 gallons less than the amount of gasoline he used on Tuesday. How many gallons of gasoline did he use in those two days?



3 Determine the order of operations in the expressions.

$$m + (n - k) - (t + k)$$

$$m + (n - k - t) + k$$

$$(m + n) - k - (t + d)$$

$$m + n - (k - t + k)$$

4 Compare:

$$254 - a \quad \square \quad 204 - a$$

$$m - 74 \quad \square \quad m - 47$$

$$c + d \quad \square \quad d + c$$

$$b - 287 \quad \square \quad b - 56$$

$$210 + n \quad \square \quad 215 + n$$

$$440 - k \quad \square \quad 540 - k$$

5 Compare:

$28 - 5 \square 28 - (5 + 1)$

$p - 8 \square p - (8 + 3)$

$32 - x \square 32 - (x + 2)$

$28 - 5 \square 28 - (5 - 2)$

$p - 8 \square p - (8 - 1)$

$26 - y \square 26 - (y - 3)$

$28 - 5 \square 28 - (5 + a)$

$q - 8 \square q - (8 + m)$

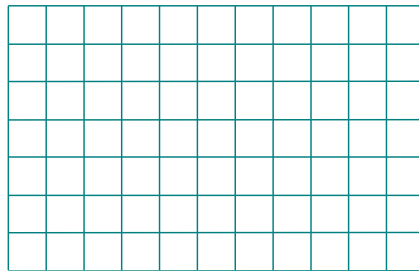

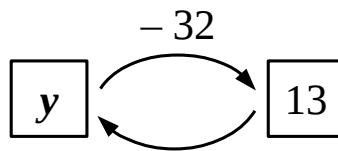
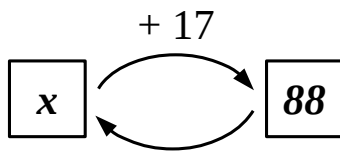
$q - a \square q - (a + m)$

$28 - 5 \square 28 - (5 - b)$

$q - 8 \square q - (8 - n)$

$q - b \square q - (b - n)$

6 Write the appropriate equations and solve them.



7 Determine the order of operations and evaluate the expressions:

$215 - (38 + 169) =$

$500 - (239 + 85) + 457 =$

$(357 + 194) - 263 =$

$(304 - 26) - (72 + 168) =$

8 Express in decimeters and centimeters:

$54 \text{ cm} = \underline{\quad} \text{ dm } \underline{\quad} \text{ cm}$

$80 \text{ cm} = \underline{\quad} \text{ dm } \underline{\quad} \text{ cm}$

$122 \text{ cm} = \underline{\quad} \text{ dm } \underline{\quad} \text{ cm}$

$240 \text{ cm} = \underline{\quad} \text{ dm } \underline{\quad} \text{ cm}$

$66 \text{ cm} = \underline{\quad} \text{ dm } \underline{\quad} \text{ cm}$

$500 \text{ cm} = \underline{\quad} \text{ dm } \underline{\quad} \text{ cm}$

9 Express in cm:

$2 \text{ dm } 7 \text{ cm} = \underline{\quad} \text{ cm}$

$8 \text{ dm } 5 \text{ cm} = \underline{\quad} \text{ cm}$

$80 \text{ dm } 5 \text{ cm} = \underline{\quad} \text{ cm}$

$24 \text{ dm} = \underline{\quad} \text{ cm}$

$66 \text{ dm} = \underline{\quad} \text{ cm}$

$30 \text{ dm} = \underline{\quad} \text{ cm}$

$1 \text{ m } 3 \text{ dm } 4 \text{ cm} = \underline{\quad} \text{ cm}$

$4 \text{ m } 6 \text{ dm } 1 \text{ cm} = \underline{\quad} \text{ cm}$

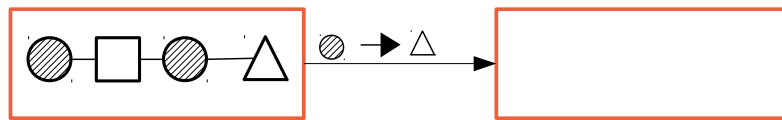
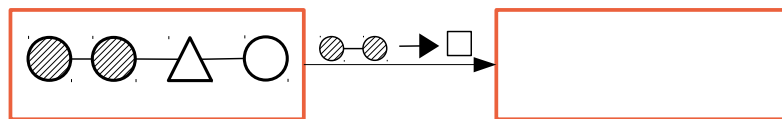
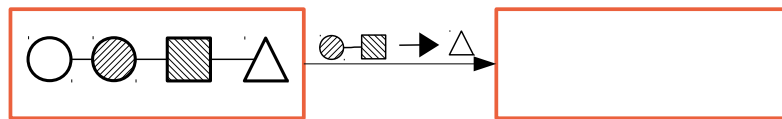
$2 \text{ m } 7 \text{ dm} = \underline{\quad} \text{ cm}$

$4 \text{ m } 34 \text{ cm} = \underline{\quad} \text{ cm}$

$6 \text{ m } 5 \text{ cm} = \underline{\quad} \text{ cm}$

$1 \text{ m } 23 \text{ cm} = \underline{\quad} \text{ cm}$

10 Replace:



11 Transform the equations by doing replacements according to the instructions:

$12 - x : 2 = 4 \xrightarrow{x : 2 \rightarrow z} \underline{\hspace{2cm}}$

$t = 5 \xrightarrow{t \rightarrow u \cdot 3} \underline{\hspace{2cm}}$

$7 + m + n = 16 \xrightarrow{q = m + n} \underline{\hspace{2cm}}$

$12 : x + 7 = 10 \xrightarrow{12 : x = t} \underline{\hspace{2cm}}$

12 Calculate:

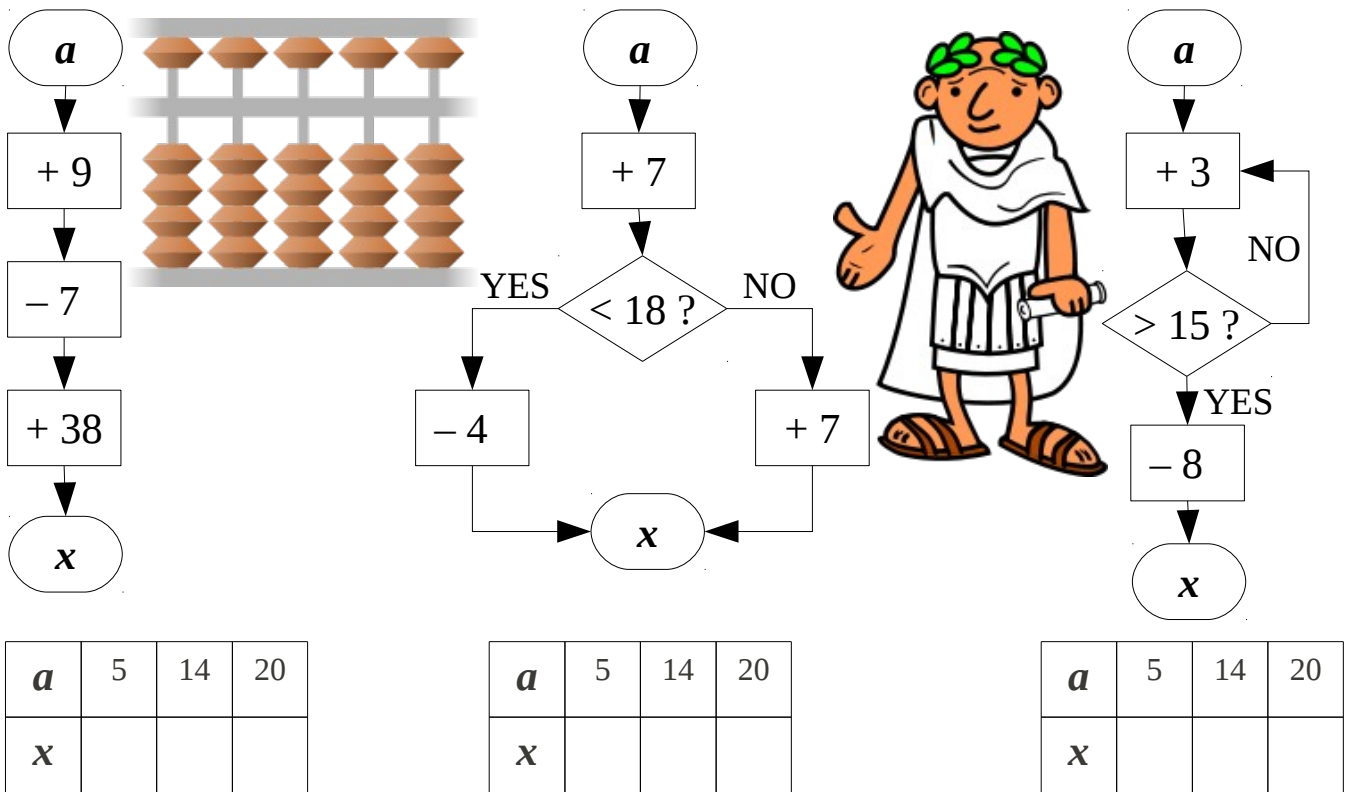
$$\begin{array}{r} 614 \\ + 329 \\ \hline \end{array}$$

$$\begin{array}{r} 407 \\ + 309 \\ \hline \end{array}$$

$$\begin{array}{r} \overset{\bullet}{9} \overset{10}{0} \\ 502 \\ - 235 \\ \hline \end{array}$$

$$\begin{array}{r} \overset{\bullet}{9} \overset{10}{0} \\ 700 \\ - 521 \\ \hline \end{array}$$

- 13 Perform the sequences of actions according to the algorithms on the drawing below. Which of these algorithms could be called *linear*, or *branching*, or *cyclic*?



- 14 Determine the sequence of operations in the expressions:

$$a + (b - c) + (d + m) - k$$

$$a + c - b + d - p + q$$

$$(m - k) + (x - y) - (a + c)$$

$$m - (a + b - c) + (m - n)$$

- 15 Insert the missing digits and inspect your answers:

$$\begin{array}{r} 3 \square 5 \\ + \square 1 \square \\ \hline 739 \end{array}$$

$$\begin{array}{r} \square 2 \square \\ + 5 \square 3 \\ \hline 741 \end{array}$$

$$\begin{array}{r} \square \square 6 \\ - 34 \square \\ \hline 542 \end{array}$$

$$\begin{array}{r} 62 \square \\ - \square \square 3 \\ \hline 267 \end{array}$$

Check:

