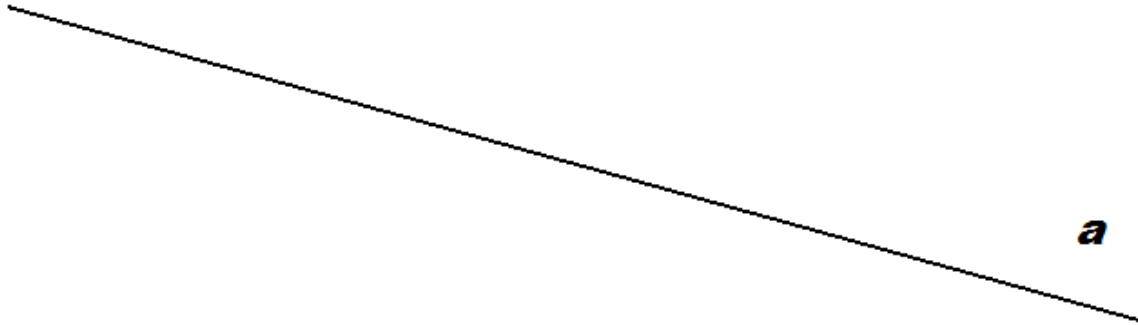


4

Place points **A**, **B**, **C**, **D**, **E** on the picture below. Points **A** and **C** should be on one side of the line *a* and the points **B**, **D** and **E** on the opposite side of the line. Draw all possible rays that do not intersect the line *a* through each two points.



5

Fill in the table:

a	2	7	5	3	5	3	4	6
a + 4								
a x 4								

6

Write down the numbers using digits:

two hundred ninety-six _____

eighty-six _____

three hundred two _____

forty-six _____

six hundred twenty-seven _____

five hundred forty-eight _____

one hundred eighty _____

nine hundred sixty _____

7

a) Lisa's bag fits into Anna's bag. Anna's bag fits into Clara's bag. Whose bag is the biggest? _____


b) Ben's tea is colder than Paul's tea, but warmer than Christina's tea. Whose tea is the coldest? _____

12 Solve for x and check your answers. Use a diagram if you need.

a) $x + 122 = 441$

b) $x - 105 = 410$

c) $401 - x = 115$



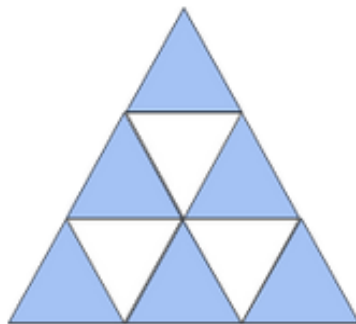
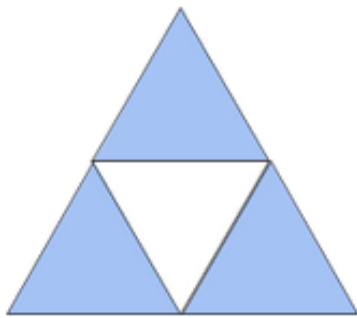
13 a. How many small triangles can you see on each drawing?

b. How many are blue?

c. How many are white?

d. How many triangles will be in the next picture in this **growing pattern**? Can you draw them?

???



1

- | | | |
|-----------------------------|-----------------------------|-----------------------------|
| # of small triangles = ____ | # of small triangles = ____ | # of small triangles = ____ |
| # of blue triangles = ____ | # of blue triangles = ____ | # of blue triangles = ____ |
| # of white triangles = ____ | # of white triangles = ____ | # of white triangles = ____ |