











3

Telling time:

 <p>a. _____ : _____</p>	 <p>b. _____ : _____</p>	 <p>c. _____ : _____</p>	 <p>d. _____ : _____</p>
 <p>e. _____ : _____</p>	 <p>f. _____ : _____</p>	 <p>g. _____ : _____</p>	 <p>h. _____ : _____</p>

**JULY**

4

Compare, using  $<$ ,  $>$  or  $=$ .

$6 + 2$    $6 - 2$

$5 - 2$    $15 - 12$

$7 + 3$    $7 + 1 + 1$

$6 + 3$    $6 + 2$

$24 - 6$    $22 - 4$

$14 + 0$    $14 - 0$

5

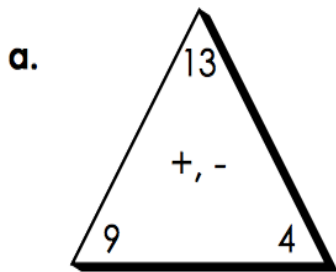
Continue patterns (write next 4 numbers):

11, 13, 15, 17, \_\_\_\_\_

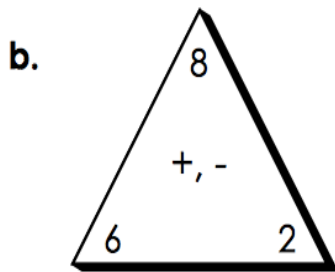
15, 25, 35, \_\_\_\_\_

80, 75, 70, \_\_\_\_\_

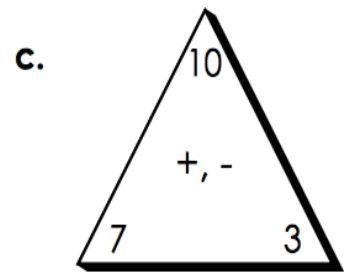
6 Use addition and subtraction to find Family Numbers in each case:



$$\begin{array}{r} \underline{\quad} + \underline{\quad} = \underline{\quad} \\ \underline{\quad} + \underline{\quad} = \underline{\quad} \\ \underline{\quad} - \underline{\quad} = \underline{\quad} \\ \underline{\quad} - \underline{\quad} = \underline{\quad} \end{array}$$



$$\begin{array}{r} \underline{\quad} + \underline{\quad} = \underline{\quad} \\ \underline{\quad} + \underline{\quad} = \underline{\quad} \\ \underline{\quad} - \underline{\quad} = \underline{\quad} \\ \underline{\quad} - \underline{\quad} = \underline{\quad} \end{array}$$




$$\begin{array}{r} \underline{\quad} + \underline{\quad} = \underline{\quad} \\ \underline{\quad} + \underline{\quad} = \underline{\quad} \\ \underline{\quad} - \underline{\quad} = \underline{\quad} \\ \underline{\quad} - \underline{\quad} = \underline{\quad} \end{array}$$

**AUGUST**

7 Three pairs of points are given - A and B, C and D, E and F.

1. Using a ruler draw a line segment  $\overline{AB}$
2. Using a ruler, draw a ray  $\overrightarrow{CD}$
3. Using a ruler, draw a line  $\overleftrightarrow{EF}$



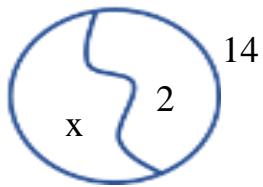
Lesson 1

Review.

8

Solve for x and check your answers. Use a diagram if you need.

a)  $x + 2 = 14$



$X = 14 - 2$

$X = 12$

Check:  $12 + 2 = 14$

b)  $x - 5 = 14$



\_\_\_\_\_

\_\_\_\_\_

\_\_\_\_\_

c)  $14 - x = 11$



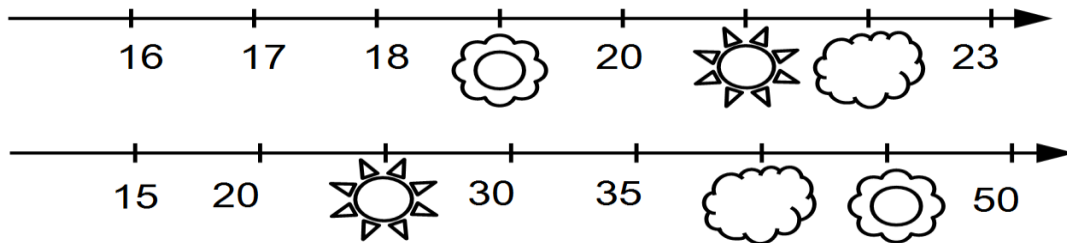
\_\_\_\_\_

\_\_\_\_\_

\_\_\_\_\_

9

What numbers are hidden under the pictures?



10

Eggs come in boxes of 12. Tom and Jane family has one box. Tom likes scramble eggs for his breakfast with 3 eggs, Jane likes 2 hard-boiled eggs for her breakfast. How many eggs left in the box after the breakfast?