

# Lesson 4. Homework

1 Compare the measurements ( $>$ ,  $<$ , or  $=$ ).

$$6 \text{ cm} + 4 \text{ cm} \square 2 \text{ cm} + 8 \text{ cm}$$

$$8 \text{ in} + 3 \text{ in} \square 9 \text{ in} + 2 \text{ in}$$

$$10 \text{ cm} - 3 \text{ cm} \square 5 \text{ cm} + 3 \text{ cm}$$

$$10 \text{ cm} - 2 \text{ cm} \square 5 \text{ cm} + 4 \text{ cm}$$

$$5 \text{ cm} + 3 \text{ cm} \square 9 \text{ cm} - 7 \text{ cm}$$

$$10 \text{ in} - 9 \text{ in} \square 5 \text{ in} - 4 \text{ in}$$

2 Compute.

$$4 + \square = 7$$

$$7 - \square = 4$$

$$3 + 5 - \square = 7$$

$$\square - 2 = 6$$

$$0 + \square = 18$$

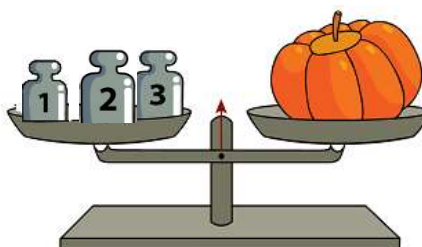
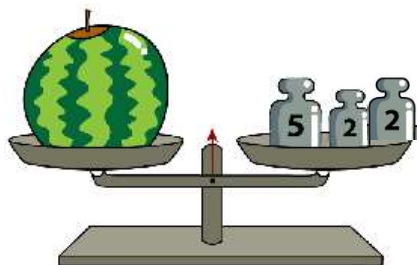
$$1 + 6 + \square = 9$$

$$5 + \square = 9$$

$$\square - 7 = 3$$

$$9 - \square - \square = 4$$


3 Find the weight of the watermelon and the pumpkin.




Watermelon: \_\_\_\_\_ lb + \_\_\_\_\_ lb + \_\_\_\_\_ lb = \_\_\_\_\_ lb

Pumpkin: \_\_\_\_\_ lb + \_\_\_\_\_ lb + \_\_\_\_\_ lb = \_\_\_\_\_ lb

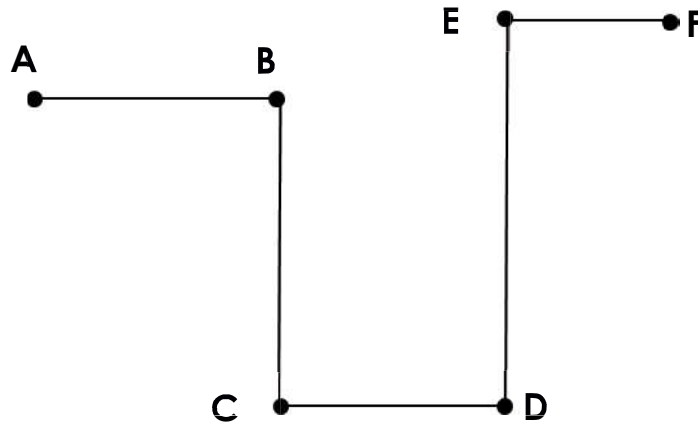
4 Circle the heaviest toy on the scales.



If possible, decide which animal weighs less. Circle that animal.



5 Use the map below and a ruler to answer the questions. You can only move along the line.



Find the distance in centimeters between

- points B and D \_\_\_\_\_;
- points A and F \_\_\_\_\_;
- points C and E \_\_\_\_\_

6 Solve the problems.

There were several birds on a branch. First, 3 birds flew away. Then 5 more birds flew away. How many birds left the branch altogether?

\_\_\_\_\_

Katherine had 4 books. Her mom bought her 2 books yesterday. Today, Katherine's mom bought her another 3 books. How many books does Katherine have now?

\_\_\_\_\_

The weight of a cat is 5 pounds. The cat weighs 2 pounds less than the dog. What is the weight of the dog?

\_\_\_\_\_

7 Compute.



$$9 - 2 + 3 - 5 =$$

$$4 + 3 - 1 + 2 - 4 =$$

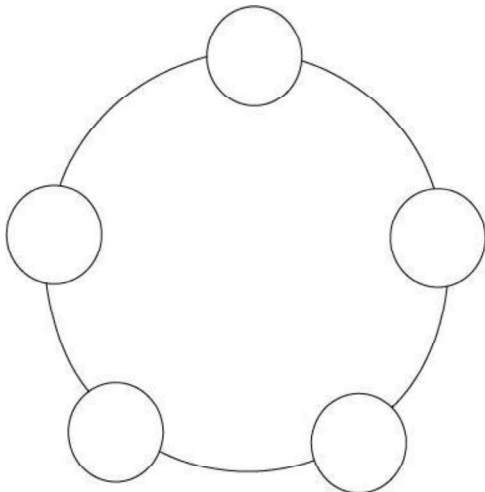
$$8 + 2 - 4 + 4 + 7 - 7 =$$

$$8 + 5 - 6 - 1 =$$

$$6 + 1 - 1 - 5 + 3 =$$

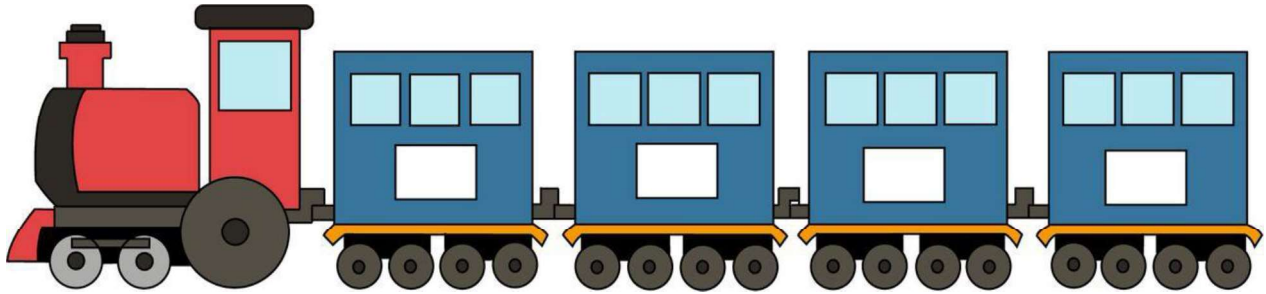
$$9 + 4 - 4 + 8 - 8 - 2 =$$

8 Katherine, Mary, Rachel, Alex, and Jessica are in a circle. Katherine is to the right of Alex. Rachel is between Alex and Mary. Jessica is to the left of Mary. Using the letters K (Katherine), M (Mary), R (Rachel), A (Alex), and J (Jessica), mark the place of each child in the circles below.




9 A monkey (M), a parrot (P), an elephant (E), and a snake (S) embark on an adventure.

- "Everyone! Sit in your cabins, behind mine!" ordered the monkey.
- "I'll sit between the elephant and the snake" said the parrot.
- "I'll sit behind the parrot" said the elephant.

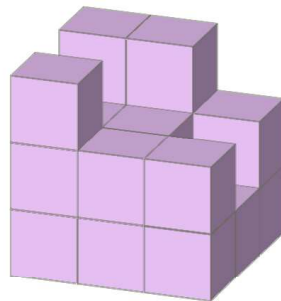


Who is sitting where?

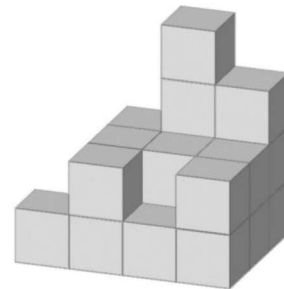
10 Bunny lives in the house to the left and Hedgehog lives in the house to the right. Bunny decided to visit Hedgehog. Can you draw a trail along which all pines are to the right for Bunny and all aspen ones are to the left?



11 Count the cubes.



\_\_\_\_\_



\_\_\_\_\_