
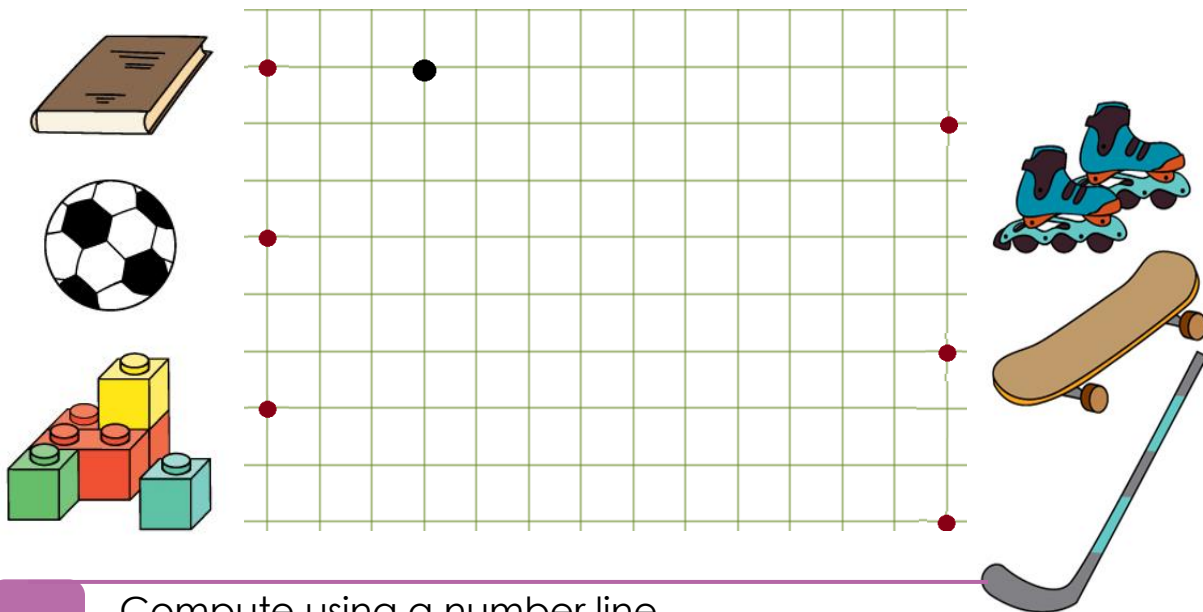


Shape, Color, Size

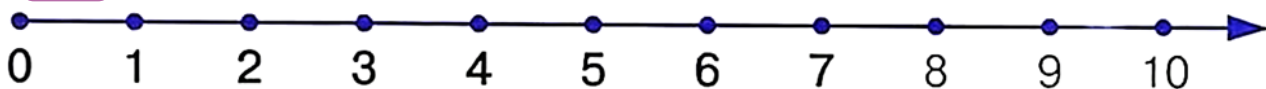
- 1 Circle the fish that is swimming to the right. Make a square around the fish swimming to the left. Cross out the fish that are swimming up.



- 2 Follow the path using the squares to find out what Tom wants for his 7th birthday: 3 to the right, 2 down, 4 right, 3 down, 4 left, 2 down, 5 right, 6 up, 2 right.



- 3 Compute using a number line.



$$5 - 2 =$$

$$7 - 5 =$$

$$3 + 5 - 1 =$$

$$10 - 5 - 1 =$$

$$4 + 3 =$$

$$3 + 4 =$$

$$6 + 2 - 3 =$$

$$2 + 8 - 3 =$$

4 Solve the word problems.

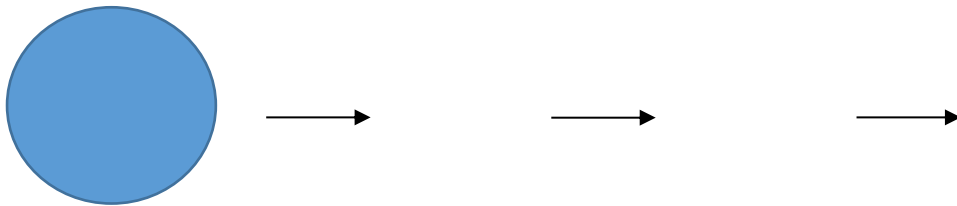
1. Peter has 5 balloons and Sophie has 3 balloons. How many balloons do they have altogether?

2. Peter has 6 balloons and Sophie has 2 balloons. How many more balloons does Peter have than Sophie?

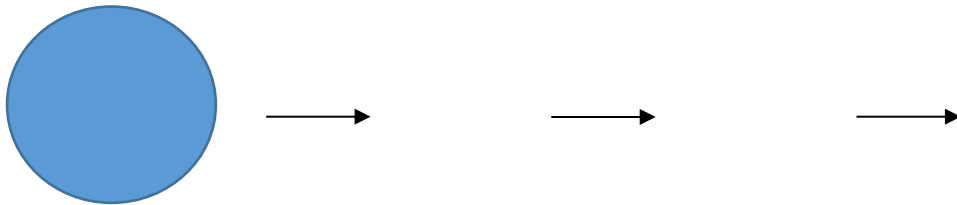
3. Sophie has 3 balloons and Peter has 2 more balloons than Sophie. How many balloons does Peter have?




5 Change the color.



Change the shape.

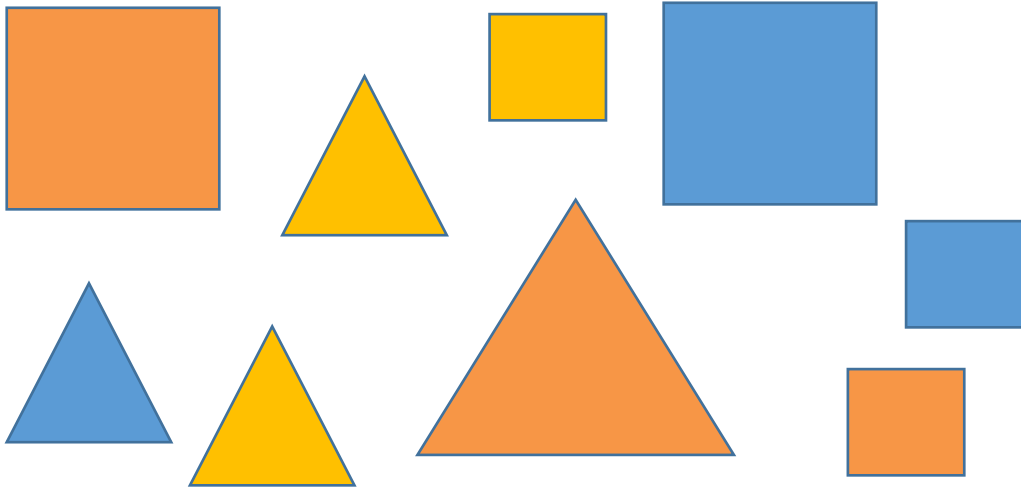


Change shape AND color.




6


Place the figures in the right boxes.



same shape



same color



same size



7

Count the cubes.

