


**Math Enrichment 4-5**

**Homework 10**

**Problem 1**

Color the circle with the number 5 red.



Write 5 in the boxes:

--	--	--	--	--


**Problem 2**

Look at the number on the blue bag. Place that number of triangles (of different colors) into the blue bag. Place the same number of circles (matching the number on the blue bag) into the yellow bag. Write the number on the yellow bag.



**Problem 3**

Continue the pattern to create 5 circles and 5 squares (in total) in the row.



### Problem 4

Assist Bunny in completing this problem. Color the leaves in each picture based on the numbers in the boxes and/or write the missing numbers.



$$\begin{array}{l} \square - 2 \\ \square - 3 \end{array}$$



$$\begin{array}{l} \square - 3 \\ \square - \square \end{array}$$



$$\begin{array}{l} \square - \square \\ \square - 4 \end{array}$$



$$\begin{array}{l} \square - 4 \\ \square - \square \end{array}$$

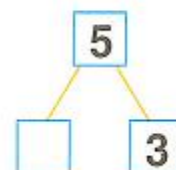
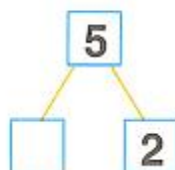
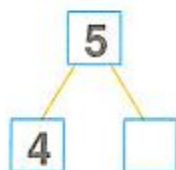
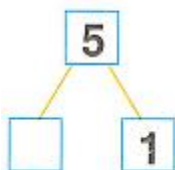
Write the correct numbers into the blue boxes to add up to 5.

$5 - \text{is } 4 \text{ and } \square$

$5 - \text{is } 3 \text{ and } \square$


$5 - \text{is } 1 \text{ and } \square$

$5 - \text{is } 2 \text{ and } \square$




**Problem 5.**

The wagon can only fit 4 cubes. How many trips do you need to make to move all the cubes?



**Problem 6.**

If you were to add a blue fish to the fishbowl, draw the bowl afterward.



**Problem 7.**

Draw the pathways to each house. Identify the longer path and color it in red. Then, circle the house to Teddy's left.



**Problem 8.**

Teddy is carrying the basket in his left paw. Color the mushrooms to the right of Teddy yellow and the mushrooms on the left red.

