

Math 0.

Homework 24.

Problem 1. Solve.

$3 + 1 + 5 = \square$


$9 - 2 - 4 = \square$

$4 + 1 + 3 = \square$

$8 - 5 + 6 = \square$

$7 - 3 + 2 = \square$

$2 + 7 - 8 = \square$



>, <, =

$3 + 4 \square 4 + 3$

$9 - 4 \square 9 - 6$

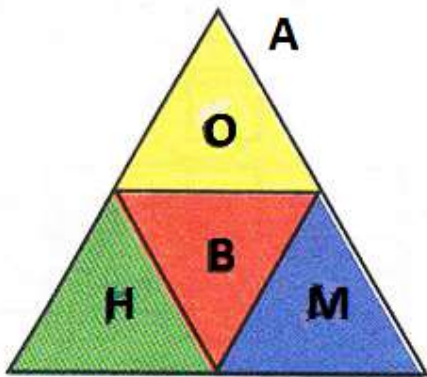
$7 - 4 \square 7 + 1$

$2 + 6 \square 2 + 7$

$8 - 3 \square 5 - 3$

$5 + 2 \square 2 + 4$

Fill out the missing letters in the empty boxes. Make true sentences.



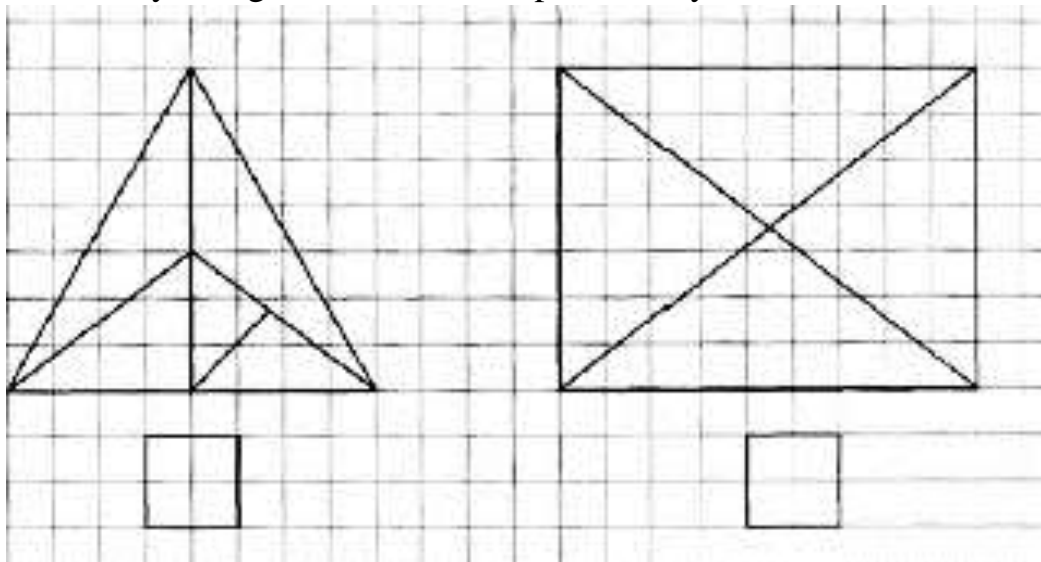
$A = \square + \square + \square + \square$

$A - O = \square + \square + \square$

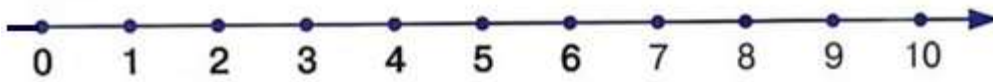
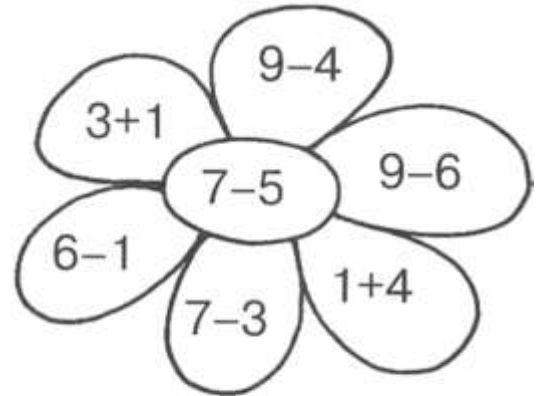
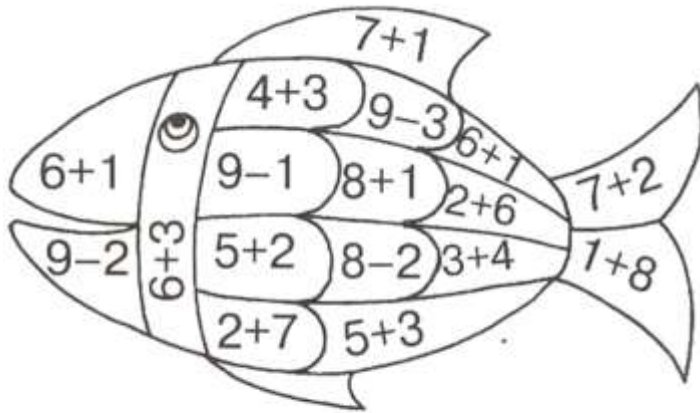
$\square - B = \square + \square + \square$

$O + M = \square - \square - \square$

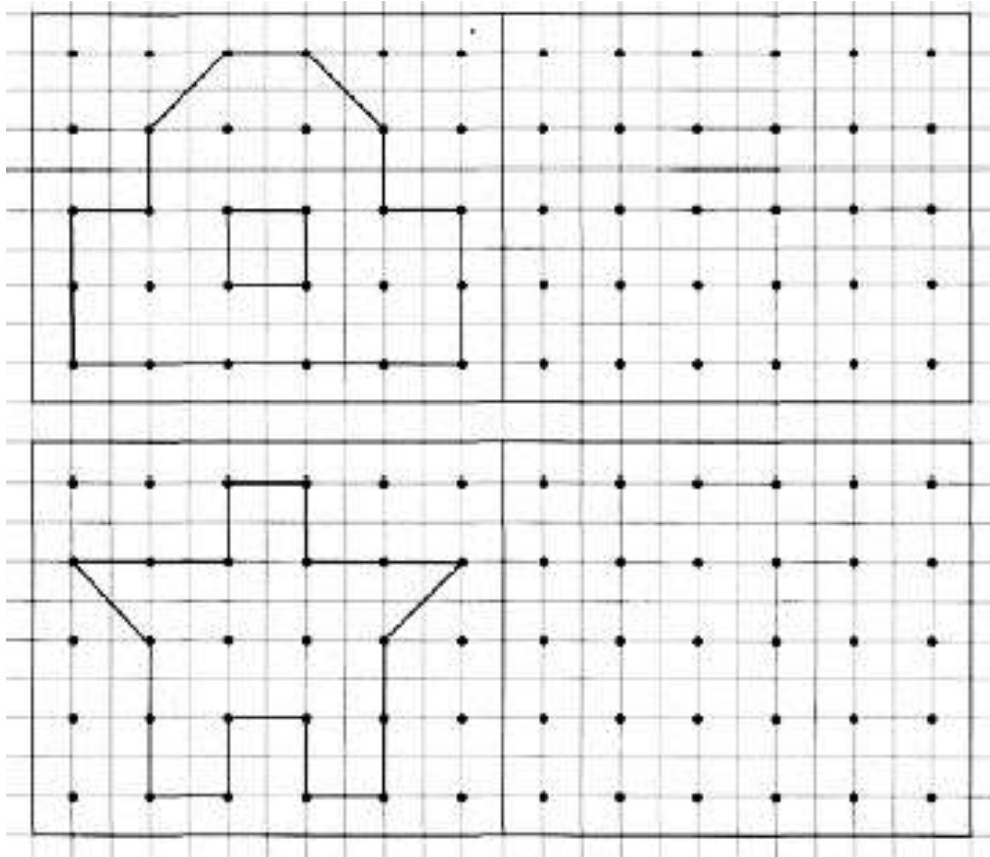
Problem 2. How many triangles make each shape? Write your answer under each picture.



Problem 3. Color in the pictures according to the color scheme.



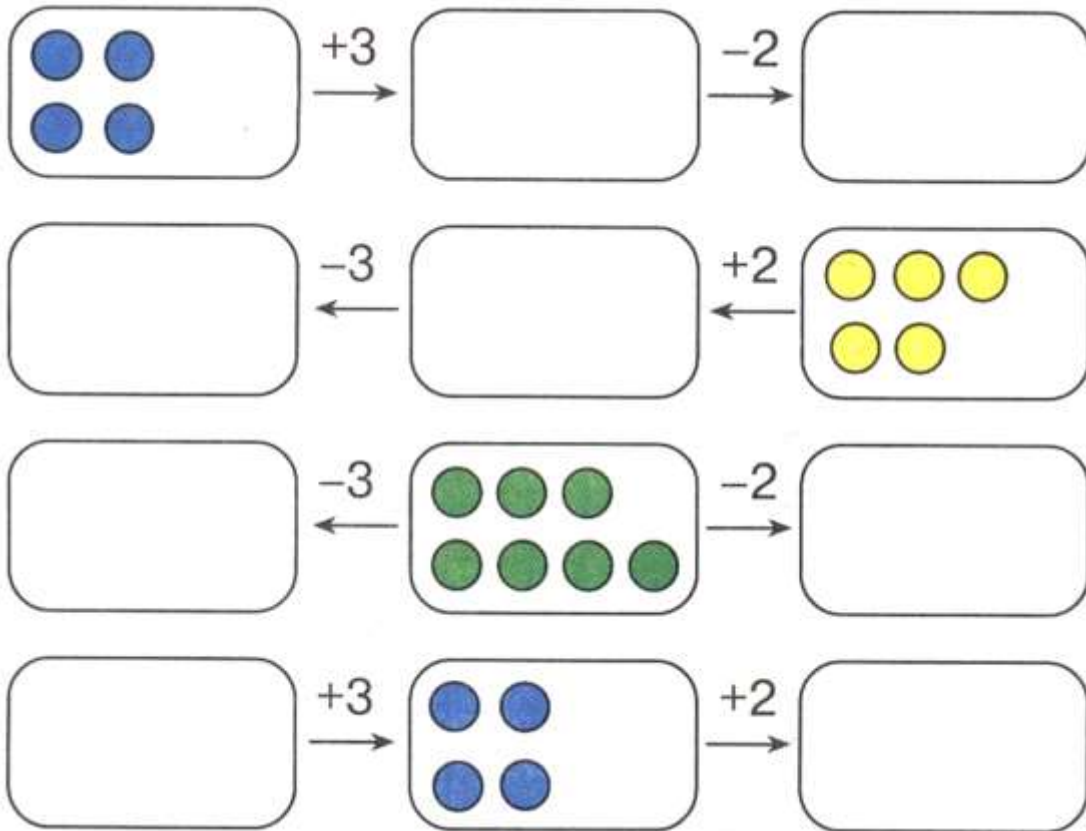
Problem 4. Copy each picture in the space provided.



Problem 5. Find the mistakes and correct the statements.

$8 = 8$	$4 + 3 = 8$	$2 + 7 = 9$	$8 - 2 > 8 - 3$
$7 > 4$	$3 + 1 < 6$	$6 - 4 > 3$	$5 + 1 < 5 + 4$
$3 < 1$	$7 + 1 = 1 + 7$	$5 < 5 + 4$	$9 - 7 = 9 - 6$

Problem 6. Draw dots in the empty “windows” according to the arrow operations.



Problem 7.

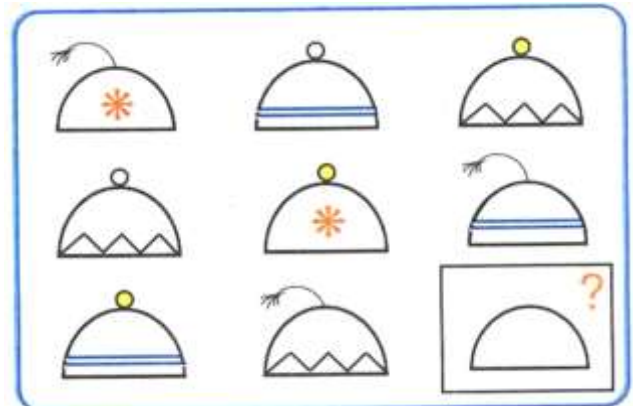
Decode a word.

Put letters according to their numerical order.

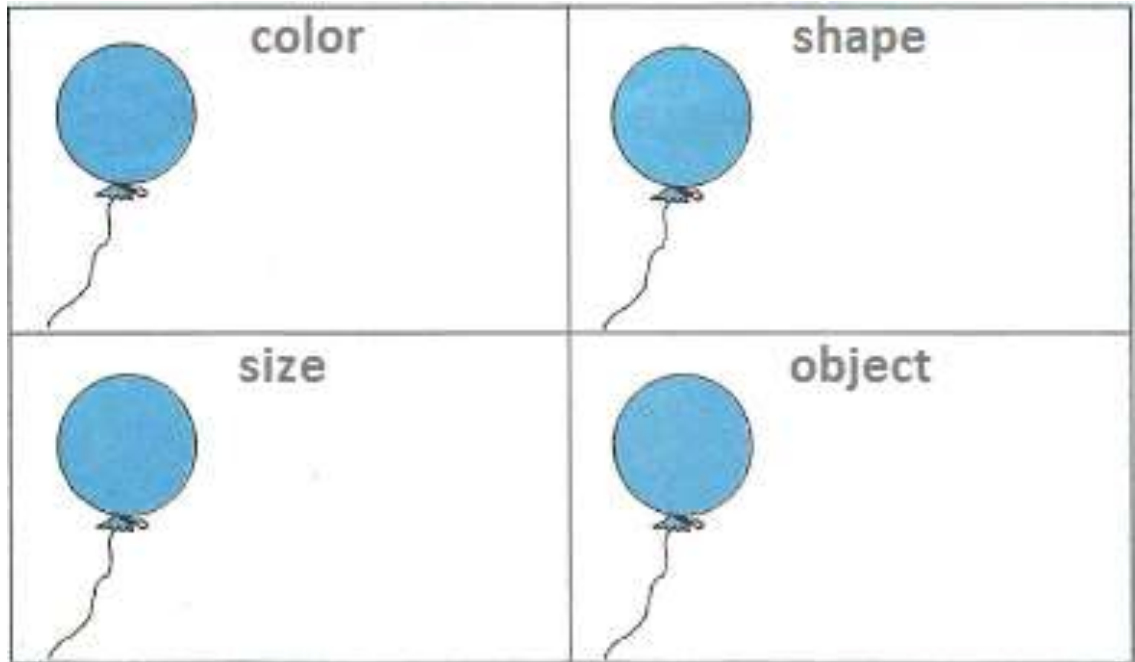
$4 + 5 - 6 =$	<input type="text"/>	K
$6 - 5 + 3 =$	<input type="text"/>	E
$3 + 6 - 7 =$	<input type="text"/>	A
$9 - 5 - 3 =$	<input type="text"/>	C

--	--	--	--

What hat is missing? Draw.



Problem 8. Draw. Change only:



Problem 9. Color according to the scheme and find out who is hiding in the picture.

