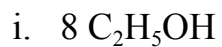
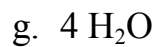
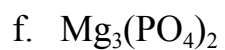
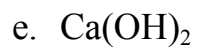
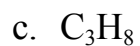


**Chemistry 0 Week 10 HW**  
**Assigned on 12/12/2021    Due date: 12/18/2021**

1. Please count the atoms for the following compounds:



**One nitrogen atom and three hydrogen atoms.**



2. Please balance the following chemical equations by **showing the steps**:

