

Operations. Results of operations

1 Calculate:

$6 + 3 =$

$8 + 5 =$

$16 - 5 =$

$11 - 4 =$

$16 + 3 =$

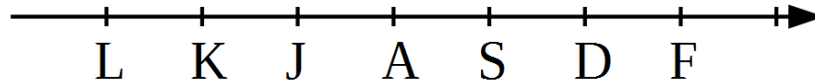
$18 + 5 =$

$26 - 5 =$

$17 - 6 =$

2 Look at the number line where letters have replaced the numbers. We know that $K + 1 = J$. What can we say about the step unit on this number line? Put the right signs:

$>, <, =$



L ... A

D ... F - 1

K + 2 ... A

S ... J

J ... L + 3

K - 1 ... S

3 Fill the diagrams below according to the equations.

$x + 5 = 16$

$7 + x = 18$

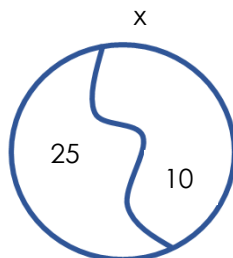
$x - 13 = 5$

$27 - x = 2$



4 Using the example below, fill in the diagram for the equation, solve it and check your answer.

x	-	10	=	25
x	=	25	+	10
x	=	35		
35	-	10	=	25
35	=	35		

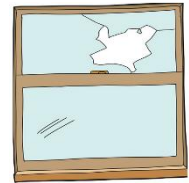




x	-	8	=	11



Operations. Results of operations.


5 Connect the operation with the result.



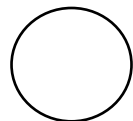

6 What operation is performed by the "magic box"?



7 Perform the following operations:



Enlarge



Color



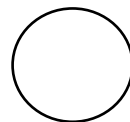
HOUSE

Change H to M

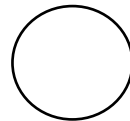


6


Add 3



Draw a triangle inside



Change the shape




LEVEL

Read from right to left

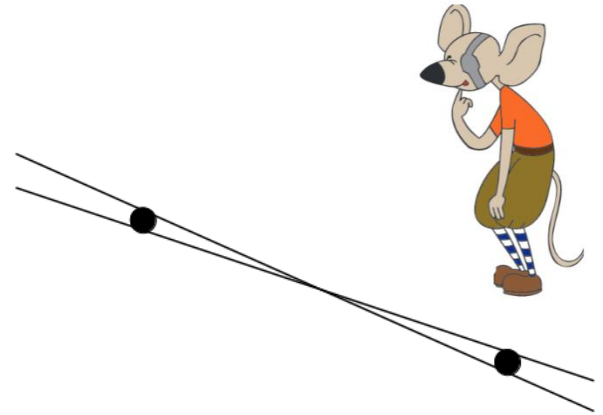
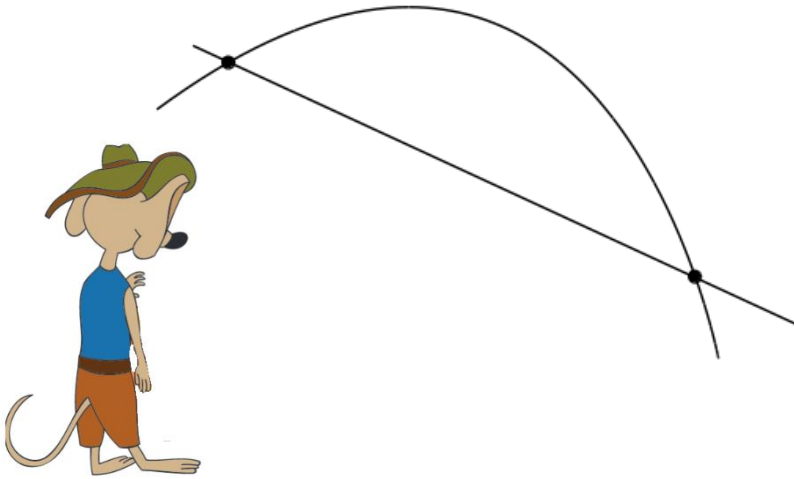


6

Subtract 4



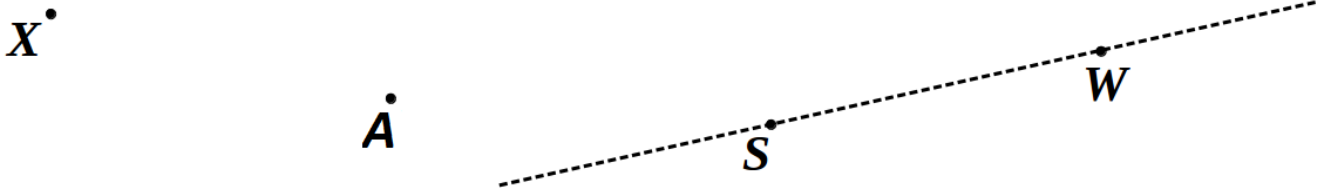
- 8 Pop Eye and Jake the Mouse wanted to plot a pair of straight lines between two points. This is what they came up with.



Do you agree with PE? _____ Why?

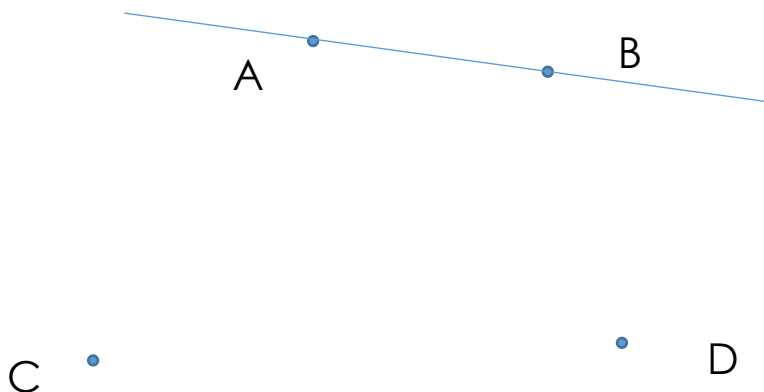
Do you agree with JTM? _____ Why?

- 9 How many straight lines can you plot between points **X** and **A**?



Find where the straight line **XA** intersects the straight line **SW**. Label this point **M**.

- 10 How many straight line you can plot between those points if each straight line is plotted through 2 points like straight line AB. Name all these straight lines.



Little Joe, Foxy Tail, and Jack the Mouse are playing "hide-and-seek". LJ again is "it". As usual, the mice can hide only in the houses. Help LJ find the brothers if we know that FT is in the house with a round window. JTM is not in the house made from straw. Pop Eye really likes his red flower. Where do FT, PE and JTM hide?



Foxy Tail



Jack the Mouse



Pop Eye

