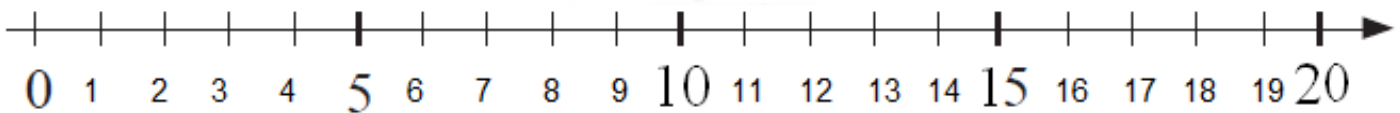
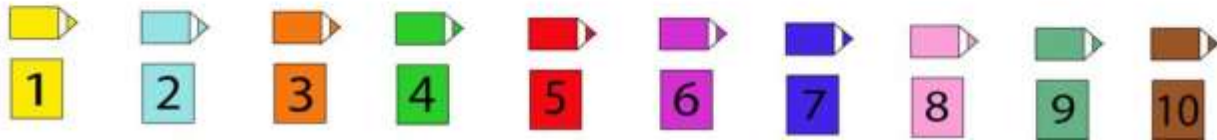



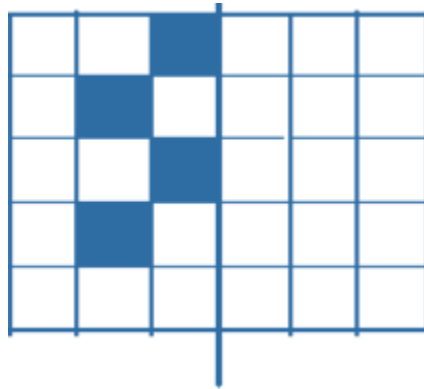
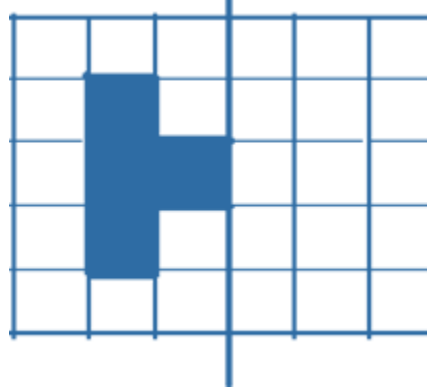
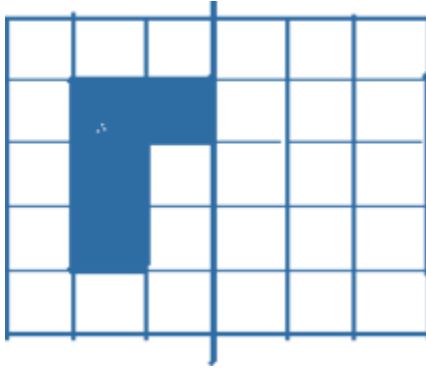
Lesson 10. Homework

1 Color the picture according to the instruction.

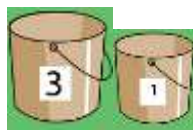
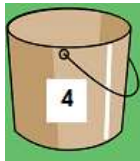


2

Add the mirror image of each figure.



3 Bee Maya gathered 4 droplets of nectar in her bucket and it became full. Her friend a bee named Taya decided to help Maya to carry nectar to their beehive. Taya had two buckets that can fit 3 droplets and 1 droplet, respectively. How Maya can give her friend exactly half of her load if initially both Taya's buckets were empty?



4 drops	4				
3 drops	0				
1 drops	0				

4

Solve the problems.

a) A year ago Betty was 4 years old? How old is Betty going to be in 3 years? _____

b) Mrs. Shore is Mary Jane's mother. Mrs. Desmond is Mrs. Shore's mother. How is Mrs. Desmond related to Mary Jane?

c) Tom is Sophie's brother. Betty is Tom's sister. How is Sophie related to Betty?

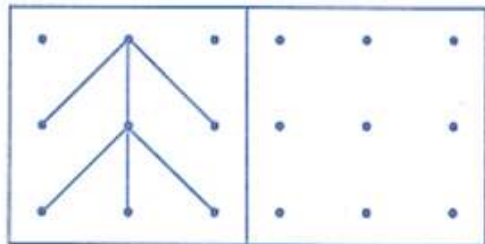
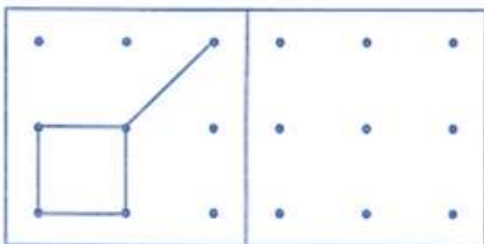
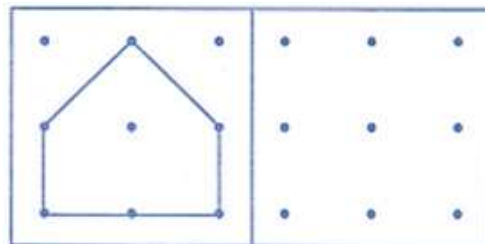
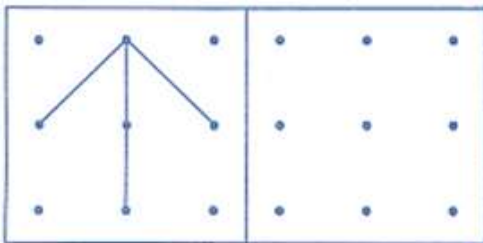
d) There were 6 birds on a tree branch. 2 birds flew to the opposite branch of the same tree. How many birds are there on the tree?

e) There were 11 passengers on a bus. On a bus stop 3 of them got out of the bus, but 3 more people got in. How many passengers are on the bus now? _____





5

Copy the image in the square next to it.



6

Fill the table according to the rule $10 = \triangle + \square$.

	9		7		5		3		4		10
		2		0		7		8		6	

7

What time is it?













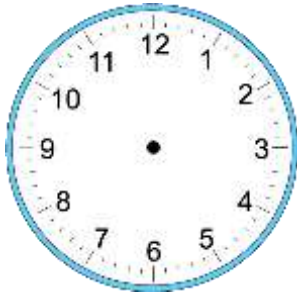




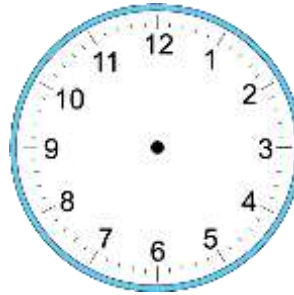


8 Tom went to bed at 9:00 pm. He woke up at 7:00 am. How long did he sleep?

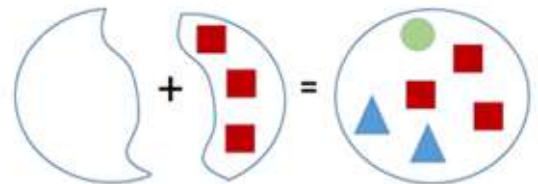
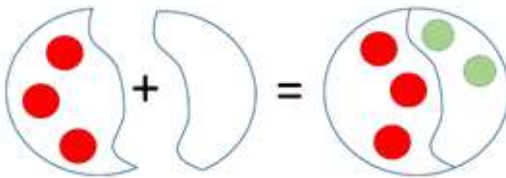
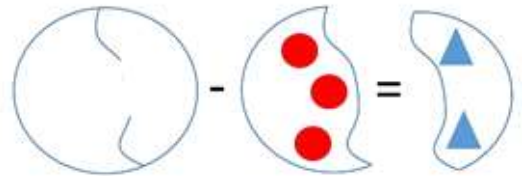
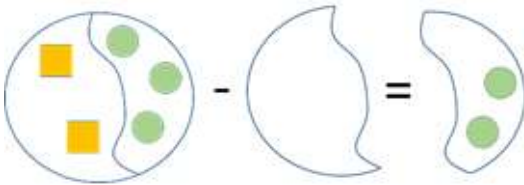
Went to bed:



Woke up:



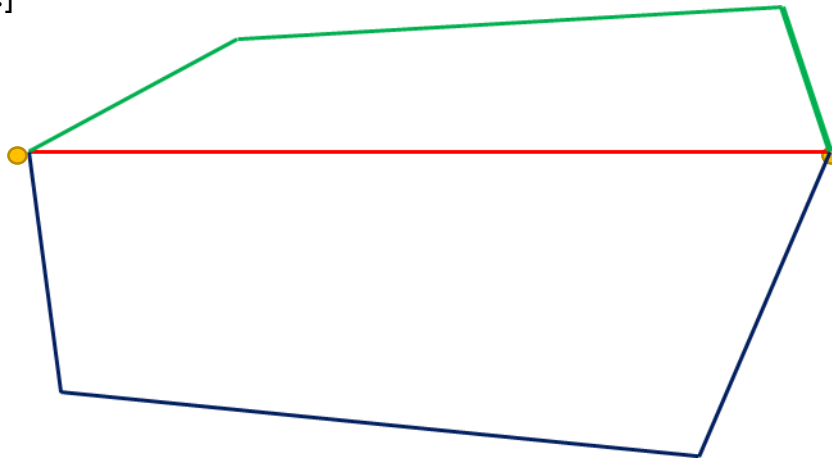
9 Find the missing part.



10 Draw the missing arrow.

11

What path will get the hedgehog home the fastest? Find the length of each path in centimeters. [Please write the length of each segment (7 segments).]



Green path _____

Red path _____

Blue path _____

12

Count the cubes.

