

The very last homework for this year 😊

1

Solve equations:

$x + 209 = 507$

$x = \underline{\quad}$

$x = \underline{\quad}$

$905 - x = 459$

$x = \underline{\quad}$

$x = \underline{\quad}$

$x - 307 = 428$

$x = \underline{\quad}$

$x = \underline{\quad}$

Check:

2

Write an expression for each problem.

There are m fish in an aquarium, and then k more fish were added. How many fish are in the aquarium?

There are d fish in the aquarium and we remove p fish from the aquarium. How many fish are in the aquarium?

There are f fish in the first aquarium and j fish in the second aquarium. How many more fish are in the first aquarium than in the second one?

There are n fish in the first aquarium and t fish in the second aquarium. We remove b fish from the first aquarium. How many fish are in both aquariums?

3

Mark the order of operations and find the result:

$23 + (9 - 7) =$

$13 - 3 + 9 = \underline{\quad}$

$20 - (3 + 2 - 1) = \underline{\quad}$

$27 - (4 + 3) - 1 - (10 + 5) = \underline{\quad}$

$60 - (4 + 7) + 4 - (10 - 8) = \underline{\quad}$

4 Open up the parentheses:

$$59 + (k + 21) =$$

$$100 - (p + 14) =$$

$$a + (6 + b) =$$

$$52 - (s + 50) =$$

$$56 + (g - 10) =$$

$$52 - (h - 7) =$$

$$63 + (54 - c) =$$

$$51 - (k - f) =$$

5 Convert the following measurements.

$$1 \text{ m } 2 \text{ dm } 7 \text{ cm} = \underline{\quad} \text{ cm}$$

$$270 \text{ dm} = \underline{\quad} \text{ m}$$

$$3 \text{ m } 7 \text{ cm} = \underline{\quad} \text{ cm}$$

$$507 \text{ cm} = \underline{\quad} \text{ m } \underline{\quad} \text{ cm}$$

$$40 \text{ m} = \underline{\quad} \text{ dm}$$

$$29 \text{ cm} = \underline{\quad} \text{ dm } \underline{\quad} \text{ cm}$$

$$314 \text{ cm} = \underline{\quad} \text{ dm } \underline{\quad} \text{ cm}$$

$$30 \text{ dm} = \underline{\quad} \text{ m}$$

$$5 \text{ m } 4 \text{ dm} = \underline{\quad} \text{ cm}$$

6 Use a ruler.

- Plot straight line **(NQ)**.
- Plot ray **(RT)**.
- Label the intersection **M**.
- Plot segment **[MF]**.

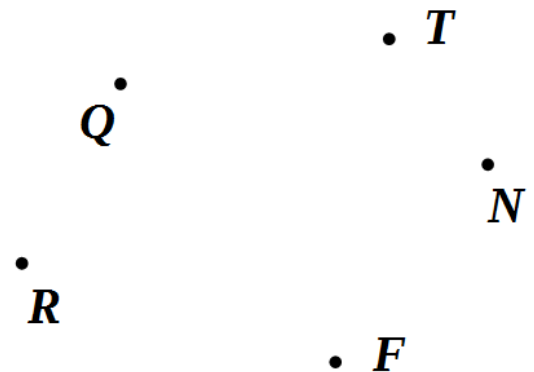
Make a right-angle template.
Using the template compare the following angles. Mark with YES the ones that are larger than the right angle.

$$\underline{\quad} \angle \text{RMF}$$

$$\underline{\quad} \angle \text{QMF}$$

$$\underline{\quad} \angle \text{FMT}$$

$$\underline{\quad} \angle \text{TMN}$$



7 Compare:

$$28 - 5 \square 28 - (5 + 1)$$

$$28 + 5 \square 28 + (5 + 1)$$

$$28 - 5 \square 28 - (5 - 2)$$

$$28 + 5 \square 28 + (5 - 1)$$

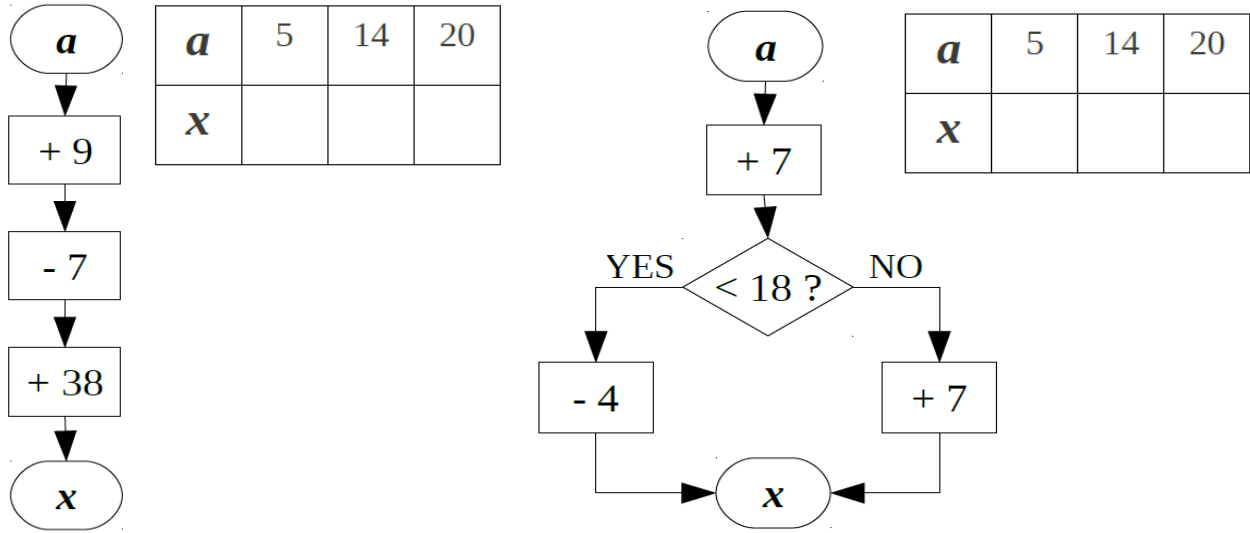
$$28 - 5 \square 28 - (5 + a)$$

$$28 + 5 \square 28 + (5 + a)$$

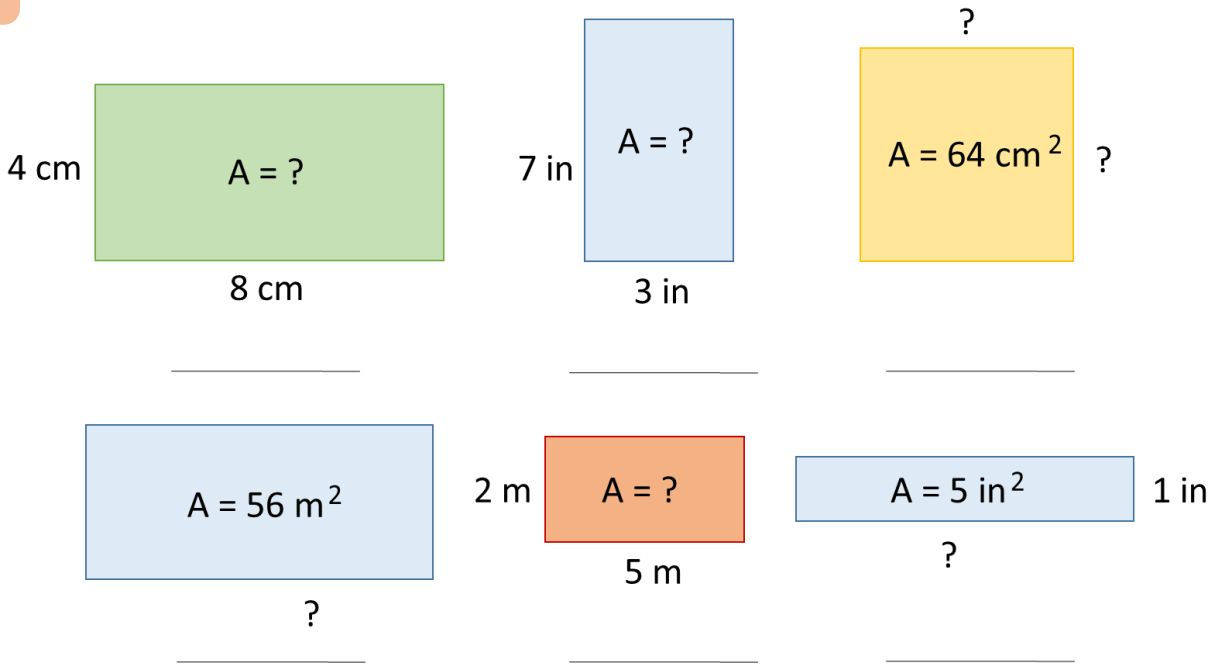
$$28 - 5 \square 28 - (5 - b)$$

$$28 + 5 \square 28 + (5 - b)$$

8 Perform the actions according to the algorithms in the drawing below. Which of these algorithms is linear and which is branching



9 Find 1) perimeter and 2) area or side of the rectangle.



10 Compare:

6×2 $6 : 2$

$c \times 2 + c$ $c \times 3$

5×2 $5 + 2$

7×3 $6 + 6 + 6$

$y \times 4 + y \times 2$ $y \times 5$

$q \times 2$ $q : 2$

$6 : 3$ $6 : 2$

$24 : 6$ $24 : 4$

$t : 2$ $t : 3$

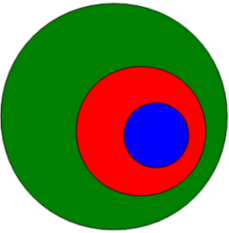
11

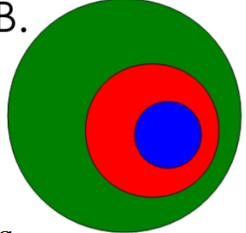
For each multiplication fact, write also a division fact.

a. $7 \times 2 = \underline{\quad}$ $\underline{\quad} \div 2 = \underline{\quad}$	b. $12 \times 2 = \underline{\quad}$ $\underline{\quad} \div 2 = \underline{\quad}$	c. $8 \times 5 = \underline{\quad}$ $\underline{\quad} \div 5 = \underline{\quad}$
d. $6 \times 7 = \underline{\quad}$ $\underline{\quad} \div \underline{\quad} = \underline{\quad}$	e. $7 \times 7 = \underline{\quad}$ $\underline{\quad} \div \underline{\quad} = \underline{\quad}$	f. $11 \times 3 = \underline{\quad}$ $\underline{\quad} \div \underline{\quad} = \underline{\quad}$
g. $9 \times 8 = \underline{\quad}$ $\underline{\quad} \div \underline{\quad} = \underline{\quad}$	h. $1 \times 5 = \underline{\quad}$ $\underline{\quad} \div \underline{\quad} = \underline{\quad}$	i. $7 \times 9 = \underline{\quad}$ $\underline{\quad} \div \underline{\quad} = \underline{\quad}$

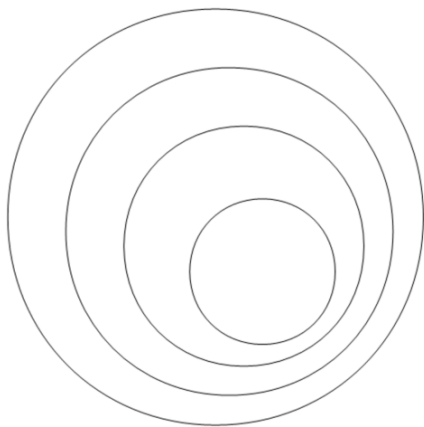
12





Color the circles that represent different groups

A.  - Buses - Vehicles - School Buses

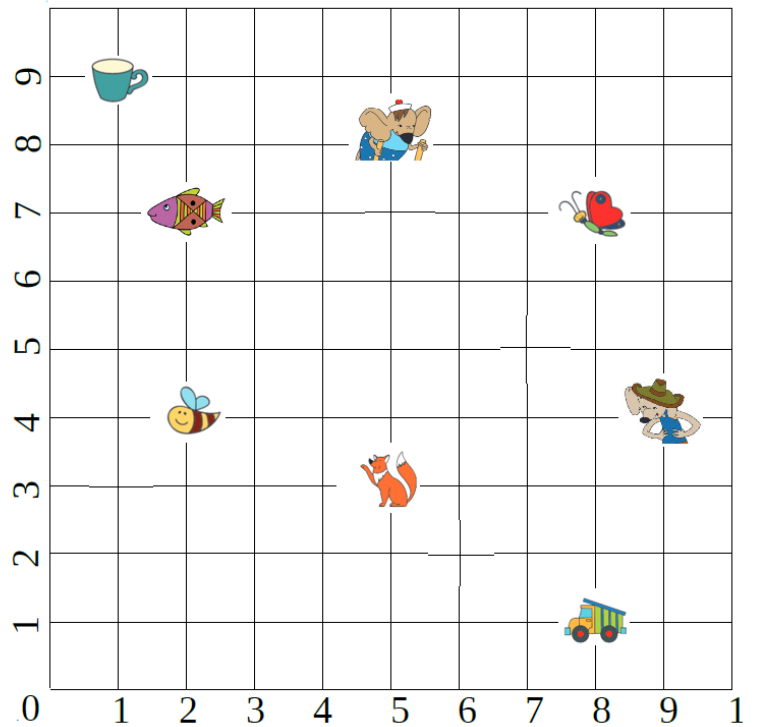
B.  - Children - People - Girls

Color the circles using the table:



Sets of	
	- Predators
	- Tigers
	- Bengal tigers
	- Animals

13 Find coordinates of the objects.



14 Look at the front and top view drawings. Match it with a 3D object.

Front View	Top View

