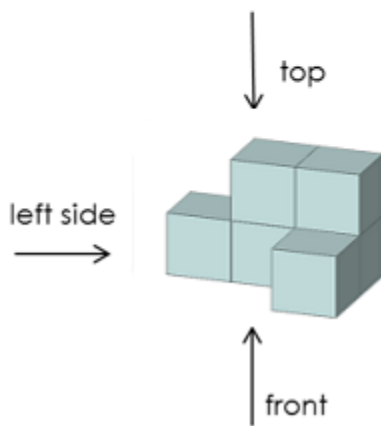



Homework 26.

1

What will you see if you look at the figure from the left and the front? Complete the drawings.

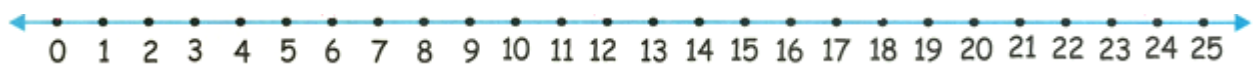


2

Calculate.

$\begin{array}{r} +1 \\ 66 \\ + 7 \\ \hline \end{array}$	$\begin{array}{r} 15 \\ + 9 \\ \hline \end{array}$	$\begin{array}{r} 17 \\ + 35 \\ \hline \end{array}$	$\begin{array}{r} 44 \\ + 18 \\ \hline \end{array}$	$\begin{array}{r} 73 \\ + 17 \\ \hline \end{array}$	$\begin{array}{r} 66 \\ + 25 \\ \hline \end{array}$	$\begin{array}{r} 43 \\ + 38 \\ \hline \end{array}$
--	--	---	---	---	---	---

$\begin{array}{r} -1 \\ 74 \\ - 7 \\ \hline \end{array}$	$\begin{array}{r} 51 \\ - 8 \\ \hline \end{array}$	$\begin{array}{r} 32 \\ - 17 \\ \hline \end{array}$	$\begin{array}{r} 44 \\ - 29 \\ \hline \end{array}$	$\begin{array}{r} 69 \\ - 47 \\ \hline \end{array}$	$\begin{array}{r} 28 \\ - 15 \\ \hline \end{array}$	$\begin{array}{r} 32 \\ - 17 \\ \hline \end{array}$
--	--	---	---	---	---	---



3

Compare.

$40 + 20 \quad \square \quad 75 - 15$

$85 - 35 + 10 \quad \square \quad 35 + 35 - 10$

$70 + 30 \quad \square \quad 70 + 20$

$70 + 20 - \text{🍓} \quad \square \quad 30 + 50 - \text{🍓}$


$60 - 10 \quad \square \quad 30 + 20$

$10 + 80 + \text{🐟} \quad \square \quad 20 + 70 - \text{🐟}$

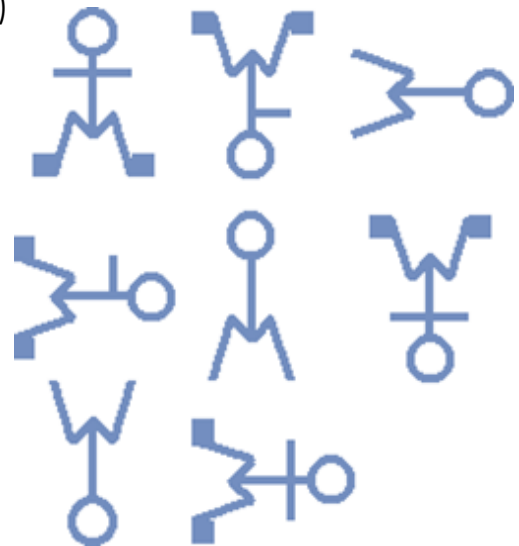
4

Find the pattern and finish it.

a)



b)



5

Calculate.

$67 + 9 = \quad 54 + 7 = \quad 77 - 8 = \quad 71 - 10 = \quad 24 + 60 =$

$20 + 27 = \quad 85 + 12 = \quad 42 - 16 = \quad 93 - 5 = \quad 46 - 17 =$

$43 + 8 = \quad 13 + 9 = \quad 57 - 8 = \quad 94 - 19 = \quad 87 + 7 =$

$78 - 24 + 21 = \quad 25 + 35 + 5 = \quad 67 - 47 + 14 =$

6

During recess, Emily put 4 strawberries onto her plate and Nina put 5 strawberries more. How many strawberries do Emily and Nina have in total?



Throughout this week, Peter read 12 stories. This is 4 stories more than he read last week. How many stories did he read last week?

Luke solved 4 puzzles in 18 minutes. This is 4 minutes faster than it took for Alex to solve the puzzles. How long did it take for Alex?



Daniel read 15 stories about traveling. He also read 16 stories about animals, which is 7 stories more than he read about sports. How many stories did Daniel read in total?

Michael was counting the number of steps in a staircase on the way to a class and he counted 14 steps. How many steps will Peter count if he goes the same way?

7

Solve.



$$X + 9 = 86$$

$$X =$$

$$X =$$

Check:



$$18 + X = 95$$

$$X =$$

$$X =$$

Check:



$$34 - X = 19$$

$$X =$$

$$X =$$

Check:



$$X - 16 = 7$$

$$X =$$

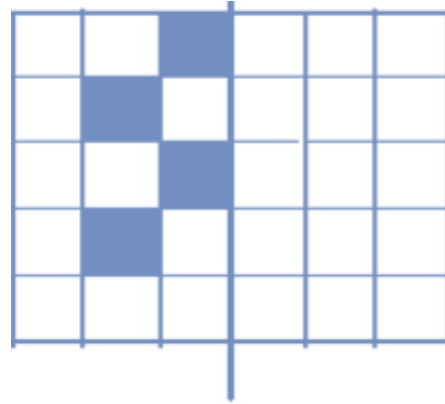
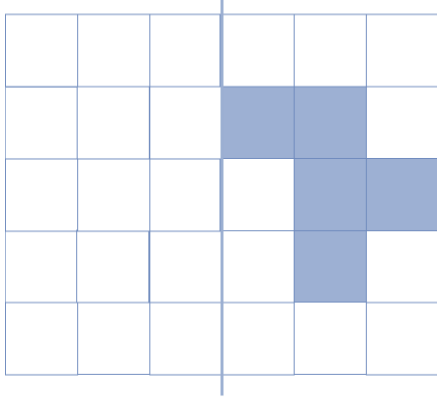
$$X =$$

Check:



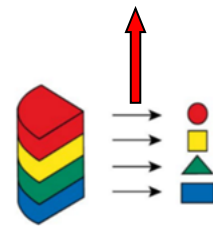
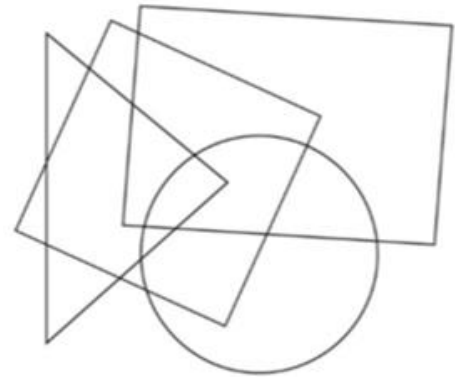
8

Add the mirror image of each figure.



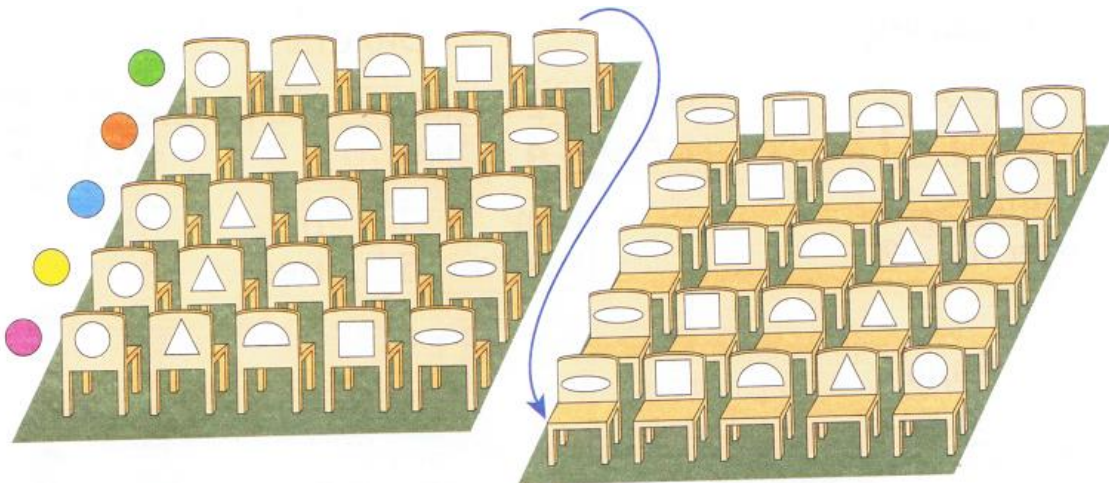
9

Color the shapes according to the instruction.




10

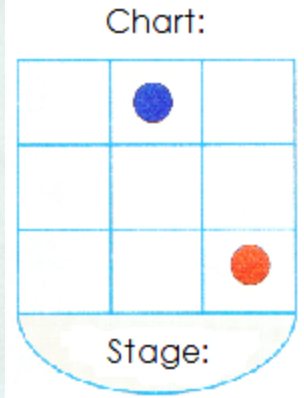
Find and color 5 seats in the theatre according to the tickets below. Do the same on the second picture, where the theatre is turned around.



Tickets:

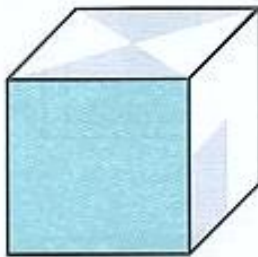


Complete the sitting chart. Mark the place where girls sit with red circles and those where boys sit with blue circles.

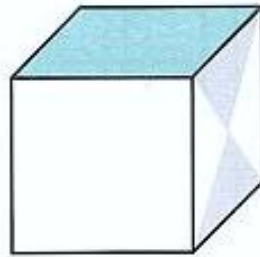


11

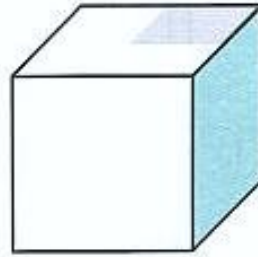
You can see 3 faces of the cube on picture 1. Finish the drawings 2 and 3 assuming that it is the same cube. If you have problem turning it in your head, cut out templates from this page, glue the cubes and try again ☺



①



②



③

