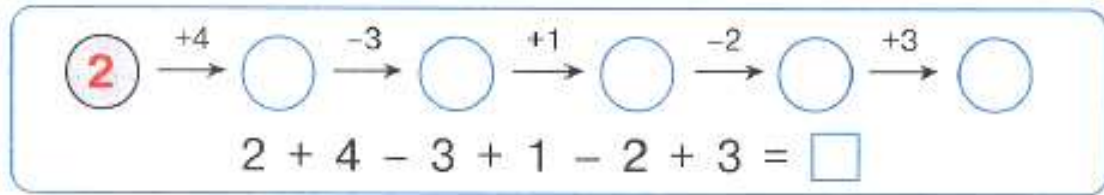


Problem 1. Continue the chain.



Find mistakes and correct them.

$3 + 2 = 5$

$4 - 3 = 1$

$3 < 5$

$6 - 4 = 2$

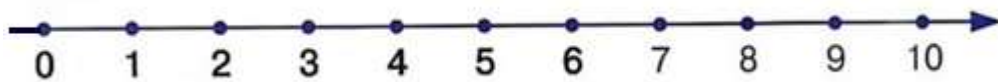
$3 + 3 = 6$

$4 > 6$

$5 + 1 = 4$

$6 - 1 = 5$

$6 > 1$



Place “+” or “-”.

$5 * 3 * 1 = 1$

$1 * 5 * 4 = 2$


$6 * 3 * 1 = 4$

$4 * 1 * 2 = 3$

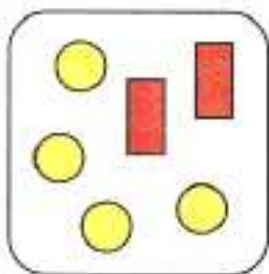
$4 * 1 * 2 = 5$

$2 * 3 * 1 = 6$

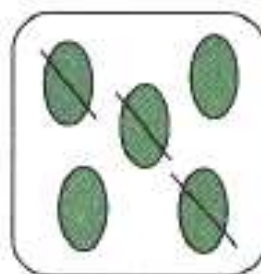
Create a number sentences according to the pictures and solve.




$6 - 2 = \square$



$4 + 2 = \square$



$\square - \square = \square$



$\square + \square = \square$

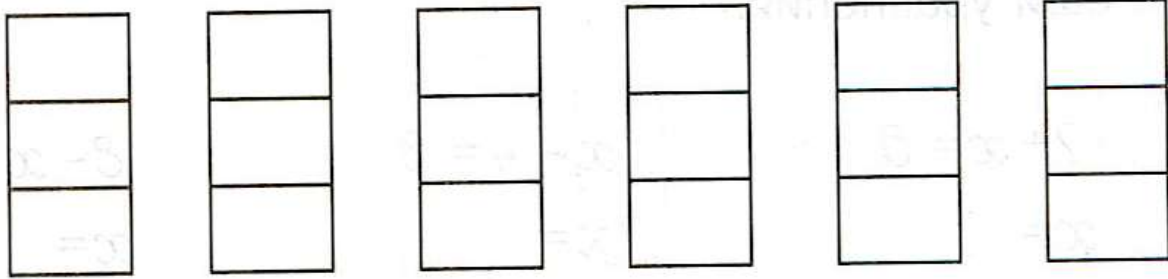
Fill in the blank boxes.

$3 + \square = 8$

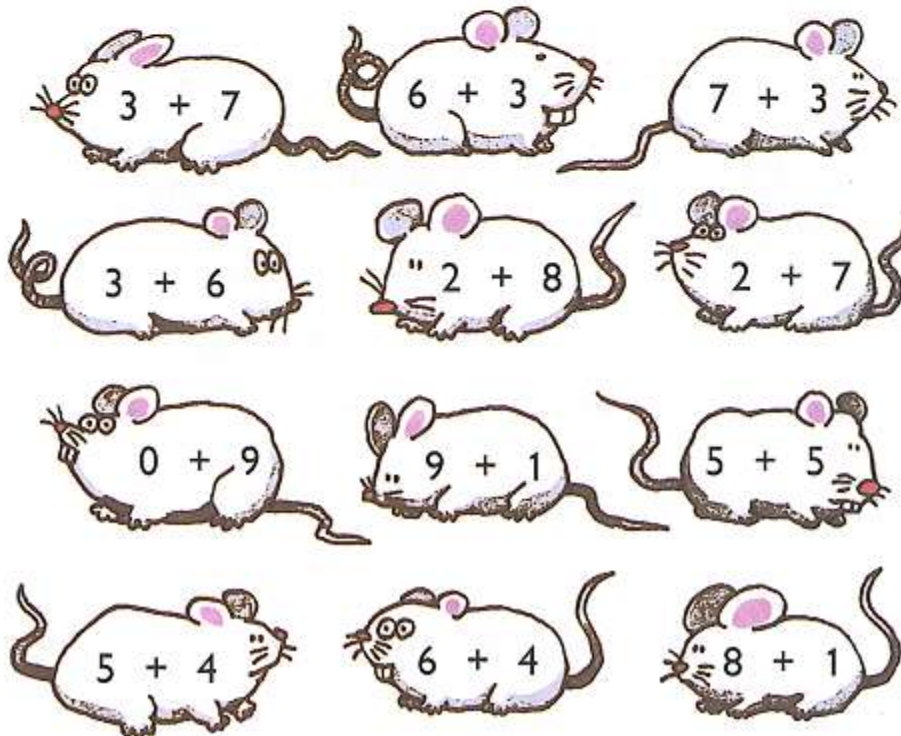
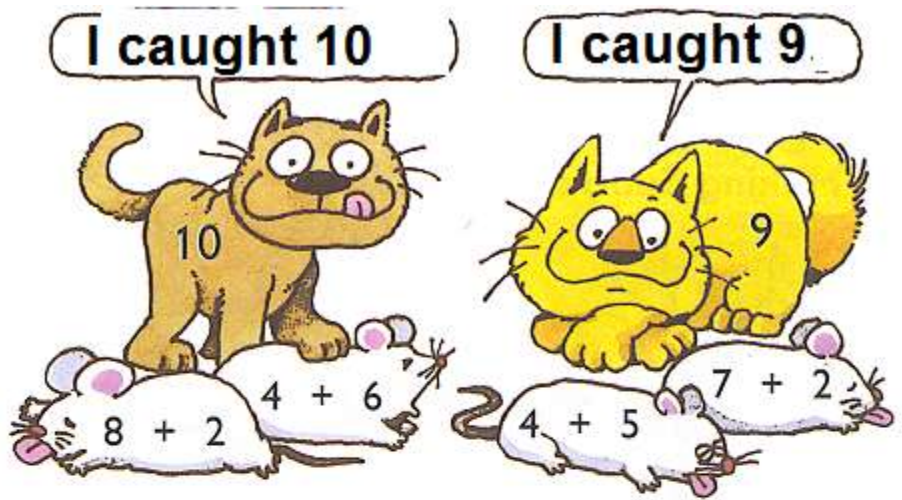
$\square - 2 = 6$

$8 - \square = 1$
































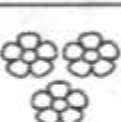



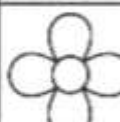
Problem 2. Color each column using 3 colors: red, yellow and blue. Make sure no column looks the same.



Problem 3. Find out what mice each cat caught. Color the mice with the same color as the catcher cat.



Problem 4. Find and color the flowers according to the addresses listed at the bottom of the page.

	A	B	C	D	E	F
1						
2						
3						
4						
5						
6						

C	3	A	6	E	2
F	2	C	1	A	4
D	5	B	4	F	3

Problem 5. Funny questions game.

- Who has the longest neck if the ostrich's neck is shorter than a rhinoceros' and longer than a giraffe's?
- A corridor is colder than a kitchen. The living room is warmer than a kitchen. What room is the coldest?

3. A book has less letters than a newspaper, but more than a workbook. What has the most letters?
4. A pencil is thicker than a pen and longer than a marker. A pencil is thinner than a marker and shorter than a pen. What is the thinnest object and what is the longest one?
5. Create your own problem.

Problem 6. Solve the problem and color according to the number rule.

