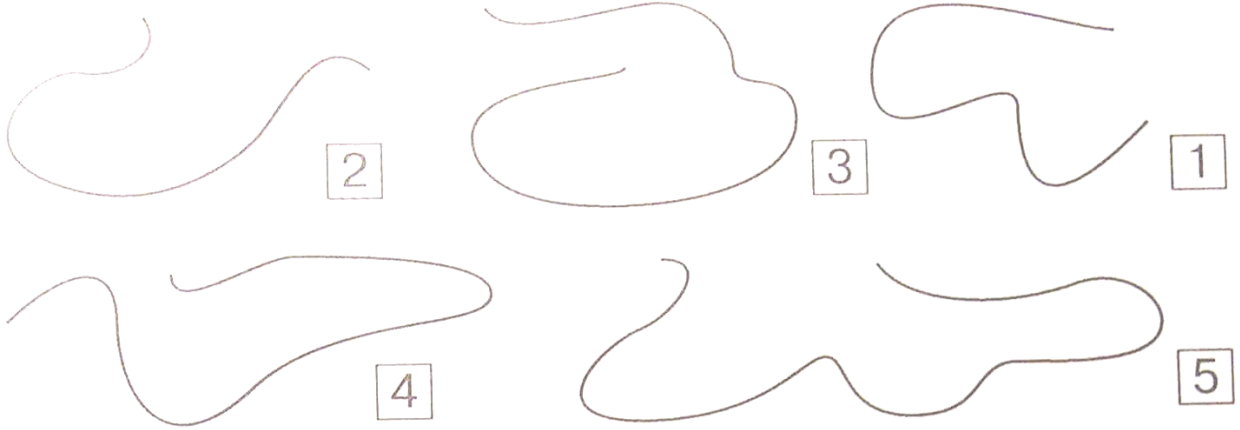


Math Enrichment 4-5


Homework 13

Today is Teddy Bear's sister birthday. She invited many friends.

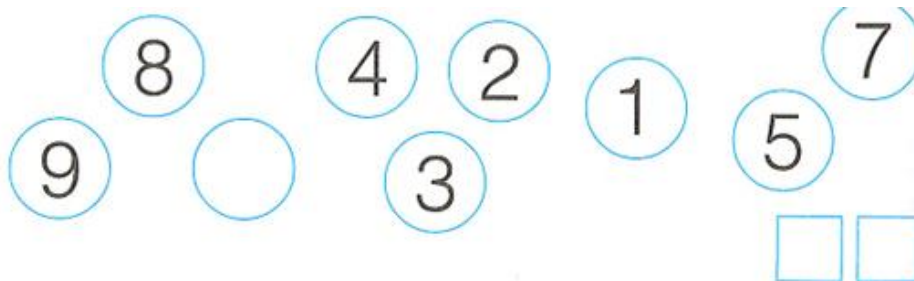
Bunny needs your help to choose a gift for her. On each string draw the same number of beads as shown inside the boxes.




Beads can be of different shapes too. Count the mber of shapes under each picture and compare them by putting $>$, $<$, $=$, in between.



Wait, we need to buy birthday balloons. Can you guess what is Bear's sister favorite number? Cross out the numbers from the smallest to the largest. Which number is missing? Write the answer inside the two boxes below.




Now Bunny has 6 balloons.




He gave 4 balloons to his friend Bear. And he will have 2 yellow balloons left to gift to Bear's sister.


Color in all of the possible different ways he could give the balloons (do not repeat the color pattern).




“Wait,” said Bear. “My sister likes special winter flowers, but where can we find them?”
I know, said bunny. Its in the forest, under the smallest pine tree, First we need to find the shortest way and color it in red. Color the longest way in blue







Find the smallest tree and circle it. Find the tallest tree and draw a line under it(underline)



Try to solve the problem now on how many flowers we will collect.

There are **5**  **under tallest tree**

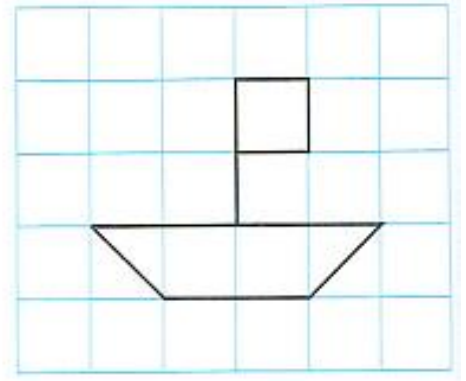
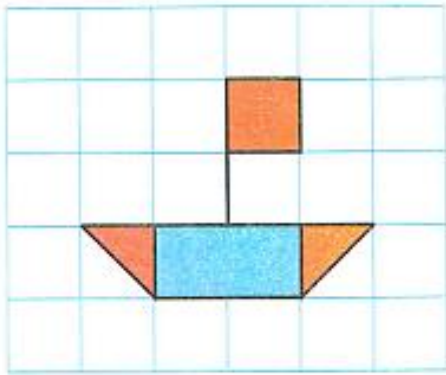
and there are 1 more  under the smallest tree.

How many    are we going to collect and give to Bear's sister for her birthday?


Can you write math story inside the boxes using "+" and "=" signs

			=	
--	--	--	---	--

Teddy Bear knows that his sister loves boats. He is going to draw a boat just like on the picture. Can you help him to copy that picture?



Berry sister wants to divide the apples between all the kids that came to wish her a Happy Birthday. Please help.



Time for birthday cake. Sister Bear has candles of two colors: green and yellow. She just turned 6. Color the candles. Decorate the cake according to the rules:



$$\text{Green square} - \boxed{2} \quad \text{Yellow square} - \boxed{}$$



$$\text{Green square} - \boxed{} \quad \text{Yellow square} - \boxed{3}$$

$$\text{Green square} - \boxed{} \quad \text{Yellow square} - \boxed{1}$$



$$\text{Green square} - \boxed{} \quad \text{Yellow square} - \boxed{2}$$



$$\text{Green square} - \boxed{} \quad \text{Yellow square} - \boxed{5}$$