





Billy's mom noticed mice in the house. She is afraid of them. Billy's family decided to adopt cat and named him Vasya. They hope that Vasya will help them to catch all the mice. Look at the picture and figure out how old is Vasya? How old is the mouse?





-Mice like cheese. Billy decided to setup a trap. Help mice to get a cheese but not to be caught by the cat.



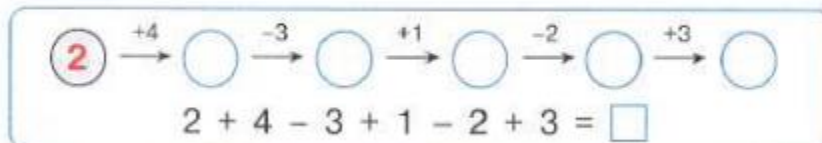
-Greta, can you please come over for the playdate and bring your cat Barsy, asked Billy. We need Barsy's help to catch all the mice.

Find out what mice each cat caught. Color the mice with the same color as the catcher cat.






Great job, cats Vasya and Barsy! You deserve a present. I know you like to play with balls. Lets play together!

Continue the chain.



Next, we have yarns of 3 colors: red, yellow and blue. Color the yarn balls in such way that the combination of colored yarn balls won't repeat.



-Mom is coming home soon, said Billy. She will be surprised by finding out that all the mice were caught! Let's surprise her even more. We will create a bouquet a flowers for her.

Find and color the flowers according to the addresses listed at the bottom of the page.

	A	B	C	D	E	F
1						
2						
3						
4						
5						
6						

C	3	A	6	E	2
F	2	C	1	A	4
D	5	B	4	F	3

-What a fun playdate with cats, Billy, said Greta! But I have to go home and help my sister with homework.

I am going to help you Masha, said Greta to her sister! Let's look:



Find mistakes and correct them.

$$3 + 2 = 5$$

$$4 - 3 = 1$$

$$3 < 5$$

$$6 - 4 = 2$$


$$3 + 3 = 6$$

$$4 > 6$$

$$5 + 1 = 4$$

$$6 - 1 = 5$$

$$6 > 1$$



Place "+" or "-".

$$5 * 3 * 1 = 1$$

$$1 * 5 * 4 = 2$$

$$6 * 3 * 1 = 4$$

$$4 * 1 * 2 = 3$$

$$4 * 1 * 2 = 5$$

$$2 * 3 * 1 = 6$$

Fill in the blank boxes.

$$3 + \square = 8$$

$$\square - 2 = 6$$

$$8 - \square = 1$$

-Masha, Lets play a game of questions:

Funny questions game.

1. Who has the longest neck if the ostrich's neck is shorter than a rhinoceros' and longer than a giraffe's?
2. A corridor is colder than a kitchen. The living room is warmer than a kitchen. What room is the coldest?
3. A book has less letters than a newspaper, but more than a workbook. What has the most letters?
4. A pencil is thicker than a pen and longer than a marker. A pencil is thinner than a marker and shorter than a pen. What is the thinnest object and what is the longest one?
5. Create your own problem.

Great job! See you soon!