

# Homework 7

1.

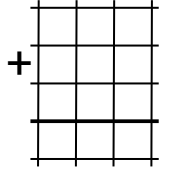
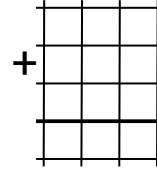
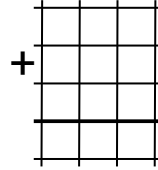
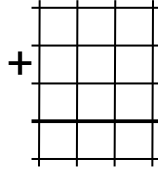
Write the numbers in columns and calculate their sums.

$213 + 48 + 456 = \underline{\hspace{2cm}}$

$276 + 509 + 84 = \underline{\hspace{2cm}}$

$525 + 370 + 9 = \underline{\hspace{2cm}}$

$35 + 460 + 187 = \underline{\hspace{2cm}}$



2.

If a winter day has 10 hours of daylight, then how many hours of darkness in the day?  
(Hint: the whole day has 24 hours)

Given: \_\_\_\_\_

Problem: \_\_\_\_\_

Answer: \_\_\_\_\_

3.

There is a group of numbers.

The following numbers belong to the group: 12, 42, 202, 432

These numbers do not belong to the group: 41, 305, 3, 77

Which of these numbers belong to the group? 102, 36, 25, 52 ? ( Circle them)

What is the rule? \_\_\_\_\_

4.

Nick and Robert run towards each other from opposite ends of a trail. When they met Nick run 363 m and Robert run 427 m. How far apart were Nick and Robert when they started to run?

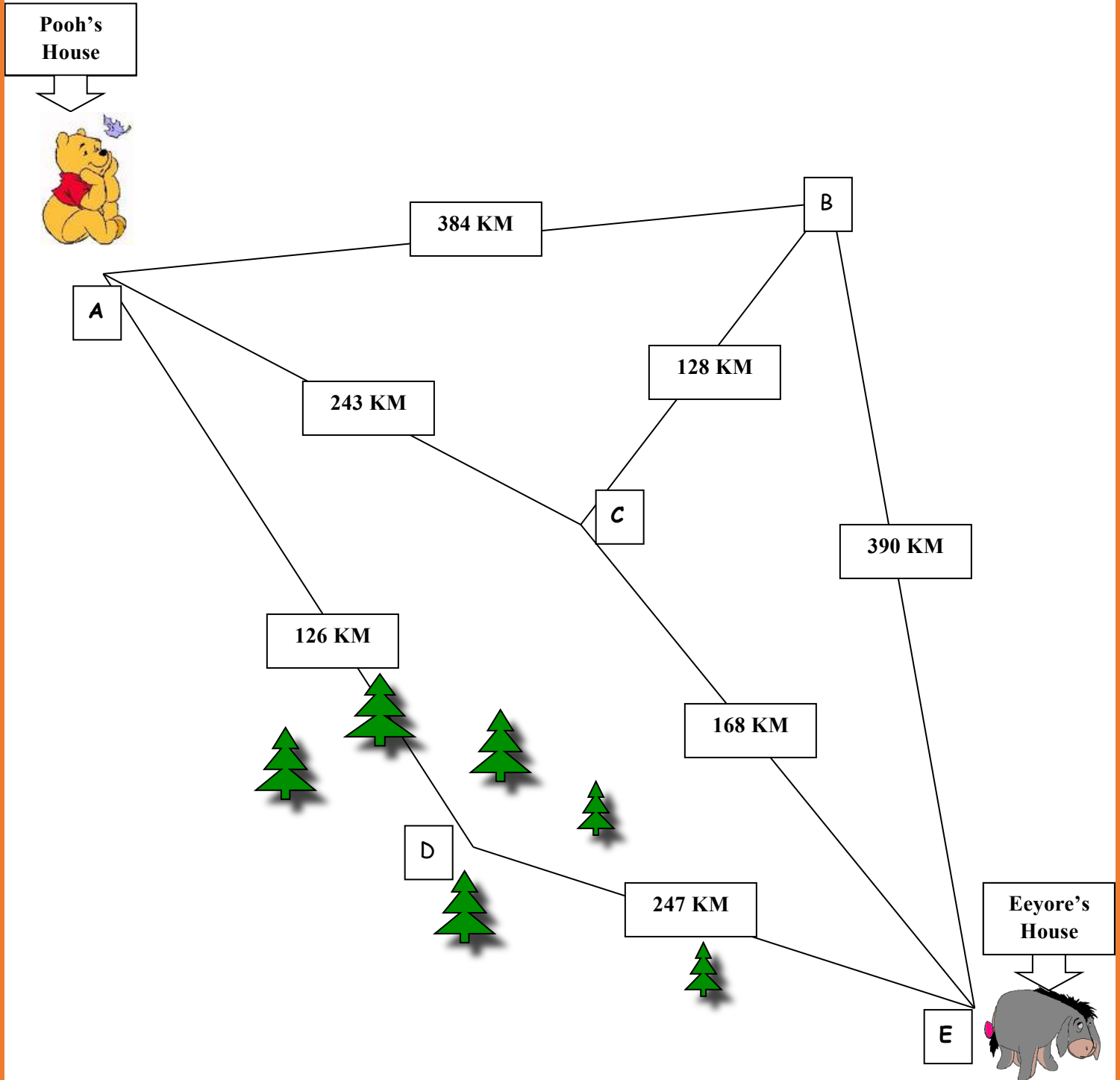


363 m

427 m

\_\_\_\_\_

5. Travelling Distances ( use your notebook to add distances, write your answers below)



Homework 7

- a) If Eeyore goes to Pooh's house and goes through the forest, what is the total distance he travels? \_\_\_\_\_
- b) What is the distance from D to E? \_\_\_\_\_
- c) What is the total distance from A to E via B? \_\_\_\_\_
- d) What is the total distance of A to C via B? \_\_\_\_\_
- e) If Pooh goes to Eeyore's house, which is the shortest route? \_\_\_\_\_

**6.** Solve for x (use your notebook to add or subtract, copy your answer here). Use diagrams.

$$19 + x = 418$$

$$x = \underline{\hspace{2cm}}$$

$$x = \underline{\hspace{2cm}}$$

$$\underline{\hspace{2cm}}$$



$$689 - x = 195$$

$$x = \underline{\hspace{2cm}}$$

$$x = \underline{\hspace{2cm}}$$

$$\underline{\hspace{2cm}}$$



$$x - 51 = 66$$

$$x = \underline{\hspace{2cm}}$$

$$x = \underline{\hspace{2cm}}$$

$$\underline{\hspace{2cm}}$$



Homework 7

7.

Melanie has a total of 48 cents. What coins does Melanie have? Is there more than one correct answer? Draw or write, if you can, at least 6 different correct answers.

**Denominations in US:**

1 cent – penny

5 cent – nickel

10 cent – dime

25 cent – quarter

1) \_\_\_\_\_

2) \_\_\_\_\_

3) \_\_\_\_\_

4) \_\_\_\_\_

5) \_\_\_\_\_

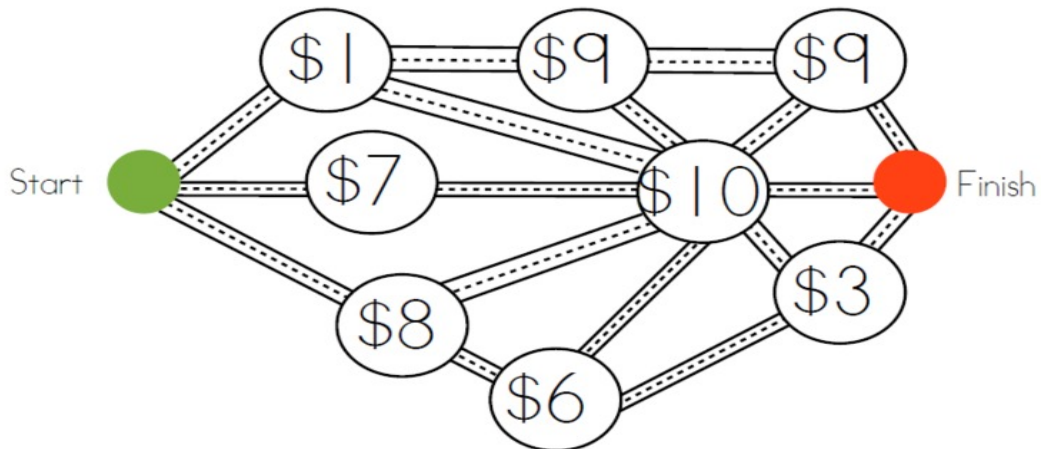
6) \_\_\_\_\_

Homework 7

8.

The attached graphics shows a map. You must get from start to finish by visiting three of the dots, at each dot you have to pay the specified number of dollars. If you have \$20 can you get from start to finish and visit three dots? How?

Mark all routes with different colors and write down how much you will pay for each route.



- 1) \_\_\_\_\_
- 2) \_\_\_\_\_
- 3) \_\_\_\_\_
- 4) \_\_\_\_\_
- 5) \_\_\_\_\_

9.

Calculate using the commutative property of addition:

$3+1+17+19 = \underline{\hspace{2cm}} = \underline{\hspace{2cm}}$

$54+5+15+6 = \underline{\hspace{2cm}} = \underline{\hspace{2cm}}$

$12+7+38+13 = \underline{\hspace{2cm}} = \underline{\hspace{2cm}}$

$11+34+19+6 = \underline{\hspace{2cm}} = \underline{\hspace{2cm}}$

$26+41+4+19 = \underline{\hspace{2cm}} = \underline{\hspace{2cm}}$

$38+11+12+19 = \underline{\hspace{2cm}} = \underline{\hspace{2cm}}$

9. Color the map of the United States

Can you color it using only 4 colors?

